

DO NOT OPEN THIS TEST BOOKLET UNTIL YOU ARE ASKED TO DO SO

Test Booklet Series

T. B. Code : ASG - 1/18

A

TEST BOOKLET
RECRUITMENT OF A. S. O.
GENERAL AWARENESS

Sl. No. **076289**

Time Allowed : $1\frac{1}{2}$ Hours

Maximum Marks : 100

: INSTRUCTIONS TO CANDIDATES :

1. IMMEDIATELY AFTER THE COMMENCEMENT OF THE EXAMINATION, YOU SHOULD CHECK THAT THIS TEST BOOKLET DOES NOT HAVE ANY UNPRINTED OR TORN OR MISSING PAGES OR ITEMS ETC. IF SO, GET IT REPLACED BY A COMPLETE TEST BOOKLET OF THE SAME SERIES ISSUED TO YOU.
2. ENCODE CLEARLY THE TEST BOOKLET SERIES A, B, C OR D, AS THE CASE MAY BE, IN THE APPROPRIATE PLACE IN THE ANSWER SHEET USING BALL POINT PEN (BLUE OR BLACK).
3. You have to enter your Roll No. on the Test Booklet in the Box provided alongside. DO NOT write anything else on the Test Booklet.
4. YOU ARE REQUIRED TO FILL UP & DARKEN ROLL NO., TEST BOOKLET / QUESTION BOOKLET SERIES IN THE ANSWER SHEET AS WELL AS FILL UP TEST BOOKLET / QUESTION BOOKLET SERIES AND SERIAL NO. AND ANSWER SHEET SERIAL NO. IN THE ATTENDANCE SHEET CAREFULLY. WRONGLY FILLED UP ANSWER SHEETS ARE LIABLE FOR REJECTION AT THE RISK OF THE CANDIDATE.
5. This Test Booklet contains 100 items (questions). Each item (question) comprises four responses (answers). You have to select the correct response (answer) which you want to mark (darken) on the Answer Sheet. In case, you feel that there is more than one correct response (answer), you should mark (darken) the response (answer) which you consider the best. In any case, choose ONLY ONE response (answer) for each item (question).
6. You have to mark (darken) all your responses (answers) ONLY on the separate Answer Sheet provided by using BALL POINT PEN (BLUE OR BLACK). See instructions in the Answer Sheet.
7. (i) All items (questions) carry equal marks. All items (questions) are compulsory. Your total marks will depend only on the number of correct responses (answers) marked by you in the Answer Sheet.
(ii) There will be negative markings for wrong responses (answers). 25(twenty five) percentage of marks allotted to a particular item (question) will be deducted as negative marking for every response (answer).
(iii) If candidates give more than one response (answer), it will be treated as a wrong response (answer) even if one of the given responses (answers) happens to be correct and there will be same penalty as above to that item (question).
8. Before you proceed to mark (darken) in the Answer Sheet the responses (answers) to various items (questions) in the Test Booklet, you have to fill in some particulars in the Answer Sheet as per the instructions sent to you with your Admission Certificate.
9. After you have completed filling in all your responses (answers) on the Answer Sheet and after conclusion of the examination, you should hand over to the Invigilator the Answer Sheet issued to you. You are allowed to take with you the candidate's copy / second page of the Answer Sheet along with the Test Booklet, after completion of the examination, for your reference.
10. Sheets for rough work are appended in the Test Booklet at the end.

DO NOT OPEN THIS TEST BOOKLET UNTIL YOU ARE ASKED TO DO SO

SEAL

1. Which is not correct about the Right to Privacy as per the judgement delivered by the Supreme Court of India ?
 - (A) It is a fundamental right of the citizens.
 - (B) It is an intrinsic part of Article 21 of the Constitution of India.
 - (C) It is absolute unlike the Right to Life and Personal Liberty.
 - (D) It is a unanimous decision by a nine judge bench of the Supreme Court headed by Hon'ble Chief Justice J. S. Khehar.
2. Which places shall be the terminals for the first Bullet Train of India ?
 - (A) Ahmedabad and Delhi
 - (B) Ghoga and Dahej
 - (C) Mumbai and Ahmedabad
 - (D) Mumbai and Karnali
3. Which team did win the Ranji Trophy 2017-18 ?
 - (A) Delhi
 - (B) Gujarat
 - (C) Mumbai
 - (D) Vidarbha
4. Who is the recipient of Dada Saheb Phalke Award 2017 ?
 - (A) Satrughna Sinha
 - (B) Vinod Khanna
 - (C) Reema Lagoo
 - (D) Sri Devi
5. Which month shall be celebrated every year as the National Nutrition Month under POSHAN Abhiyan ?
 - (A) March
 - (B) May
 - (C) August
 - (D) September
6. Who have won the 2018 Raman Magsaysay Award ?
 - (A) M. S. Swaminathan and Sanjay Rajaram
 - (B) Bharat Bhatwani and Sonam Wangchuk
 - (C) Gauri Lankesh and Rajendra Singh
 - (D) Medha Patkar and Kailash Satyarthi
7. Which country has allowed women to drive with effect from June 2018 ?
 - (A) Iran
 - (B) Saudi Arabia
 - (C) Iraq
 - (D) Jordan
8. Which country did host the Commonwealth Heads of Government Meeting 2018 ?
 - (A) India
 - (B) Australia
 - (C) Denmark
 - (D) England

9. Which city has been projected by the Population Division of the UN Department of Economic and Social Affairs to be the most populous city of the world in 2028 ?
- (A) Tokyo
(B) Delhi
(C) Beijing
(D) Mumbai
10. Who is the author of the book "Gandhi : The Years That Changed The World (1914-1948)" ?
- (A) Bipan Chandra
(B) Ramachandra Guha
(C) Romila Thapar
(D) Fatima Meer
11. Which battle did put an end to the French Challenge to British Supremacy in India ?
- (A) Battle of Seringapatam
(B) Battle of Plassey
(C) Battle of Buxar
(D) Battle of Wandiwash
12. Which is not correct ?
- (A) Odisha was conquered by the British in 1803.
(B) Odisha was ruled by the Marathas at the time of conquest.
(C) Odisha was ceded to the East India Company by the Treaty of Argaoon.
(D) Odisha's conquest was effected by Richard Wellesley.
13. Which Act did introduce the principles of elections ?
- (A) Indian Councils Act 1892
(B) Indian Councils Act 1909
(C) Government of India Act 1919
(D) Government of India Act 1935
14. Where was the Revolt of 1857 kindled ?
- (A) Delhi
(B) Meerut
(C) Barrackpore
(D) Lucknow
15. Where was the headquarters of Ghadar Party established ?
- (A) Vancouver
(B) San Francisco
(C) Portland
(D) Berlin
16. When did Gandhiji address a public meeting at Cuttack during the Non-cooperation Movement ?
- (A) January 24, 1921
(B) March 23, 1921
(C) March 27, 1921
(D) August 3, 1921

17. When did Gandhiji break the salt law at Dandi ?
- (A) March 12, 1930
 (B) March 16, 1930
 (C) April 5, 1930
 (D) April 6, 1930
18. Where did Subhas Chandra Bose establish the Provisional Government of Free India ?
- (A) Tokyo
 (B) Singapore
 (C) Bangkok
 (D) Berlin
19. What is not correct regarding the Preamble of the Indian Constitution ?
- (A) It embodies the ideals of the Constitution.
 (B) It is an integral part of the Constitution.
 (C) It can not be amended.
 (D) It is enforceable in a Court of Law.
20. What does Article 35(A) of the Indian Constitution provide for ?
- (A) Inapplicability of declaration of National Emergency in Jammu and Kashmir without concurrence by the Government of the State
 (B) Limitation of fundamental rights of the armed forces personnel deployed in insurgency areas
 (C) Saving of laws with respect to permanent residents of Jammu and Kashmir and their rights
 (D) Restriction to citizen's rights in the area under force of martial law
21. Who are the electors for the Office of the Vice President of India ?
- (A) Elected members of Lok Sabha and Rajya Sabha
 (B) Elected members of Lok Sabha, Rajya Sabha and State Legislative Assemblies
 (C) Elected Members of only Rajya Sabha
 (D) Elected and nominated members of Lok Sabha and Rajya Sabha
22. What is an advance grant made by the Parliament pending regular passage of the budget called ?
- (A) Appropriation Bill
 (B) Vote on Account
 (C) Vote on Credit
 (D) Supplementary Grant

23. Which writ is issued by the Supreme Court or a High Court to command a public authority to perform a public statutory duty that is a part of their official duty but fail to perform ?
- (A) Habeas Corpus
(B) Mandamus
(C) Certiorary
(D) Quo Warranto
24. Which subject has been transferred from the State List to the Concurrent List by a Constitutional Amendment ?
- (A) Public Health and Sanitation
(B) Education
(C) Agriculture
(D) Road Transport
25. When was the amendment providing Constitutional Status to Municipalities made effective ?
- (A) 1991
(B) 1992
(C) 1993
(D) 1994
26. Which is the largest constituent of Atmosphere ?
- (A) Methane
(B) Oxygen
(C) Carbon dioxide
(D) Nitrogen
27. Which type of rock is granite ?
- (A) Sedimentary
(B) Igneous
(C) Metamorphic
(D) Organic
28. What is not correct with regard to earthquake ?
- (A) It is caused by endogenetic forces of earth.
(B) The magnitude of energy released by it is measured by Richter Scale.
(C) The damage caused by it is measured by Mercally Intensity Scale.
(D) Epicenter is the point deep under the ground where it actually begins.
29. Which state is not bisected by the Tropic of Cancer ?
- (A) Gujarat
(B) Odisha
(C) Bengal
(D) Rajasthan
30. Why is Chilika Lake called a Lagoon ?
- (A) It is formed due to damming of sections of river channels.
(B) It is formed due to flowing in of rain water into local depressions.
(C) It is produced due to erosional and depositional action of waves in the coastal regions.
(D) It is formed by remnants of ancient ocean and sea areas.

31. Which state has the longest coastline ?
- (A) Gujarat
(B) Andhra Pradesh
(C) Maharashtra
(D) Odisha
32. Where are the oldest rocks found ?
- (A) Himalayas
(B) Aravallis
(C) Siwaliks
(D) Indo-Gangetic Plain
33. Which state has the highest percentage of its geographical area covered by forests as per the Government Report of 2018 ?
- (A) Madhya Pradesh
(B) Arunachal Pradesh
(C) Nagaland
(D) Mizoram
34. Which is a tool of executive control to enforce administrative accountability ?
- (A) Audit
(B) Pressure Groups
(C) Writs
(D) Appointment and Removal
35. What was the theme of the 21st National Conference on e-governance in 2018 ?
- (A) Artificial intelligence and e-governance
(B) Transparency and e-governance
(C) Technology and good governance
(D) Technology for Accelerating Development
36. What is called a Rolling Plan ?
- (A) A plan that changes its target every year
(B) A plan that changes its allocation every year
(C) A plan that does not change its target every year
(D) A plan that changes its target and allocation every year
37. Which is the most appropriate measure of the country's economic growth ?
- (A) Gross Domestic Product
(B) Net Domestic Product
(C) Gross National Product
(D) Per Capita Real Income
38. Which is the first open defecation free state ?
- (A) Rajasthan
(B) Kerala
(C) Sikkim
(D) Himachal Pradesh

39. Which Scheme is intended to provide market-relevant skill development training to the youth ?
- (A) Sampada
(B) Swayam
(C) Saksham
(D) Sankalp
40. What is the product 'Ulta Chaata' used for ?
- (A) Retaliating attack
(B) Recycling plastic
(C) Tracking absconded criminal
(D) Conserving and harvesting rain water
41. Which is the first indigenous Battle Tank of Indian Army ?
- (A) Ajeya
(B) Arjun
(C) Bhisma
(D) Vijayanta
42. Where was the Rafale aircraft acquired from ?
- (A) England
(B) France
(C) Italy
(D) Switzerland
43. Where is the Indian National Defence University under construction ?
- (A) Amethi
(B) Pune
(C) Binola
(D) Dehradun
44. What is the lander of Chandrayana-2 named as ?
- (A) Raman
(B) Kalam
(C) Homi
(D) Vikram
45. What are the non-stick cooking utensils coated with ?
- (A) Anodized Aluminium
(B) Enameled Cast Iron
(C) Teflon
(D) Copper
46. What was the theme of World Earth Day observed worldwide to demonstrate support for environment protection ?
- (A) Clean Earth-Green Earth
(B) Environmental and Climate Literacy
(C) Trees for the Earth
(D) End Plastic Pollution

47. What is not correct with respect to Olive Ridley Sea Turtles ?
- Gahirmatha is world's largest known nesting and breeding ground of such type of turtles.
 - Two other mass nesting beaches for such turtles in Odisha are located on the mouth of rivers Rushikulya and Daya.
 - The eggs of such turtles hatch at night and the hatchlings are highly sensitive to light.
 - These species are recognised as Vulnerable in the Red List of IUCN.
48. Which is not mentioned as a green house gas in the Kyoto Protocol to the United Nations Framework Convention on climatic change ?
- Carbon dioxide
 - Carbon monoxide
 - Methane
 - Nitrous oxide
49. Whose concept was Non-Aligned Movement ?
- Marshall Josip Broz Tito
 - Sukarno
 - Gamal Abdel Nasser
 - Jawaharlal Nehru
50. Who is eligible to be the Chairman of Human Rights Commission of India ?
- The sitting Chief Justice of India
 - A former Chief Justice of India
 - A former Judge of Supreme Court
 - A former Chief Justice of a High Court
51. Which of the following statements is correct about the President of India ?
- Addresses first session of Parliament after each General Election.
 - Addresses first session of Parliament at the beginning of each year.
 - Addresses every session of Parliament.
 - Never addresses Parliament.
52. Who of the following founded the Ahmedabad Textile Labour Association ?
- Mahatma Gandhi
 - J. B. Kripalani
 - N. M. Joshi
 - Sardar Vallabhbhai Patel

53. 82 and 1/2 degree E longitude is geographically significant to India because:
- (A) It determines the Indian Standard Time
 - (B) It was a bearing on the tropical climate of India
 - (C) It divides India into eastern and western zones
 - (D) It enables determining local time in eastern India
54. For regulation of the Insurance Trade in the country, the Government has formed:
- (A) SEBI
 - (B) Reserve Bank of India
 - (C) Insurance Regulatory and Development Authority
 - (D) General Insurance Corporation
55. For what is the Manas Sanctuary in Assam known?
- (A) Bears
 - (B) Rhinos
 - (C) Elephants
 - (D) Bisons
56. Historians are of the view that the British signed the Treaty of Bassein (1802) with a 'Cypher'. Who was this 'Cypher'?
- (A) Raghunath Rao
 - (B) Daulat Rao Sindhia
 - (C) Baji Rao II
 - (D) Nana Fadnavis
57. In India, how many states share the coastline?
- (A) 7
 - (B) 8
 - (C) 9
 - (D) 10
58. Which of the following mountain ranges form a dividing line between the Ganges Plain and the Deccan Plateau?
- (A) Aravalli
 - (B) Vindhya
 - (C) Satpura
 - (D) Ajanta
59. Integrated Kashang Hydroelectric Project and Sainj Hydroelectric Project which are being supported by Asian Development Bank are located in which of the following states?
- (A) Jammu & Kashmir
 - (B) Himachal Pradesh
 - (C) Uttarakhand
 - (D) Punjab

60. Via which among the following amendments of the Constitution of India, Delhi was designated as National Capital Territory (NCT) ?
- (A) 63rd Amendment Act
 (B) 69th Amendment Act
 (C) 74th Amendment Act
 (D) 76th Amendment Act
61. What is the current repo rate in the second bi-monthly monetary policy review of RBI for FY19 ?
- (A) 6.50%
 (B) 6.25%
 (C) 6.00%
 (D) 6.75%
62. Which among the following acts has not been enacted by Parliament of India ?
- (A) AFSPA
 (B) POTA
 (C) MCOCA
 (D) FEMA
63. Who among the following has written the book titled 'The Perils of Democracy' ?
- (A) P. S. Ramamohan Rao
 (B) P. C. Alexander
 (C) Gurudas Kamat
 (D) Shankar Dayal Sharma
64. Who among the following was the first Speaker of the Lok Sabha ?
- (A) Ganesh Vasudev Mavalankar
 (B) M. A. Ayyangar
 (C) Sardar Hukam Singh
 (D) N. Sanjiva Reddy
65. The "Ninety East Ridge" is a submarine volcanic ridge located in:
- (A) Pacific Ocean
 (B) Atlantic Ocean
 (C) Indian Ocean
 (D) Arctic Ocean
66. Which among the following would be the longest day in Australia ?
- (A) June 21
 (B) September 22
 (C) December 22
 (D) March 23
67. The Hindu and Jain mythology refer to which among the following as the centre of the universe ?
- (A) Mount Kailash
 (B) Ujjain
 (C) Mount Meru
 (D) Pushkar Lake
68. Bring out the sea which has no coastline ?
- (A) White Sea
 (B) Tasmanian Sea
 (C) Sargasso Sea
 (D) Japan Sea

69. Which among the following is the largest tropical lake in the world ?
- (A) Lake Victoria
(B) Lake Malawi
(C) Lake Kivu
(D) Lake Turkana
70. On which among the following dates, World Hindi Day is celebrated ?
- (A) January 10
(B) January 15
(C) January 17
(D) December 17
71. Which among the following Viceroys was associated with the 'Ilbert Bill Controversy' ?
- (A) Lord Curzon
(B) Lord Lytton
(C) Lord Ripon
(D) Lord Hardinge
72. Arrange the following events/movements in the correct order of their chronology :
- (i) Rowlatt Act Satyagraha
(ii) Civil Disobedience Movement
(iii) Boycott of Simon Commission
(iv) Quit India Movement
- (A) (i), (ii), (iii), (iv)
(B) (i), (iii), (ii), (iv)
(C) (ii), (iii), (iv), (i)
(D) None of the above
73. The only session of Indian National Congress which was presided by Mahatma Gandhi was held at :
- (A) Belgaum
(B) Faizpur
(C) Allahabad
(D) Karachi
74. At which among the following places, National Flag was hoisted for the first time in India ?
- (A) Lucknow
(B) Nagpur
(C) Kolkata
(D) Delhi
75. Bring out the only incorrect statement :
- (A) Kaveri is the longest river of Tamil Nadu.
(B) India is the second largest producer of Chillies after China.
(C) Regulating Act 1773 established a Supreme Court in India
(D) Attorney General of India is appointed as per Article 1976.
76. UDYAMI helpline is for :
- (A) Large capital Industries
(B) Female entrepreneur
(C) Farmers introducing technology in Farming
(D) Micro, small and medium size enterprises

77. What is the upper limit of RTGS transaction in India ?
- (A) Rs. 5 Lakhs
(B) Rs. 10 Lakhs
(C) Rs. 15 Lakhs
(D) No limit
78. Who among the following has written the book "Growth and Finance" ?
- (A) Bimal Jalan
(B) K. Subba Rao
(C) C. Rangrajan
(D) Amartya Sen
79. Which among the following is popularly known as mercantile law of India ?
- (A) Contract Law
(B) Law of Torts
(C) Labour Law
(D) Property Law
80. Mutual Funds are regulated in India by which among the following ?
- (A) RBI
(B) SEBI
(C) Stock Exchanges
(D) RBI and SEBI both
81. In which year Mission Olympics in Army Programme was launched ?
- (A) 1999
(B) 2000
(C) 2001
(D) 2002
82. Check which is not an agency of U. N. ?
- (A) International Committee of Red Cross
(B) FAO
(C) IMF
(D) ILO
83. An Indian who become President of International Court of Justice is :
- (A) Dr. Nagendra Singh
(B) Justice R. N. Thakur
(C) Justice P. L. Bhagwati
(D) Justice H. R. Reddy
84. Which of the following country is not a permanent member of UN Security Council ?
- (A) China
(B) Japan
(C) Russia
(D) France
85. Who has become the first Indian cricketer to score 2,000 runs in T20 International Cricket ?
- (A) Mithali Raj
(B) Virat Kohli
(C) Rohit Sharma
(D) Harmanpreet Kaur

86. Who has been crowned Femina Miss India World 2018 ?
- (A) Shreya Rao
(B) Anukreethy Vas
(C) Meenakshi Chaudhary
(D) Neelam Khurana
87. Which renowned personality has been appointed as the Brand Ambassador of the Sikkim Government ?
- (A) Akshay Kumar
(B) A. R. Rahman
(C) Virat Kohli
(D) Sachin Tendulkar
88. The first biannual Indian Air Force Commanders' Conference 2018 was held in which city ?
- (A) New Delhi
(B) Guwahati
(C) Pune
(D) Mumbai
89. What was the theme of National Statistics Day 2018 ?
- (A) Statistics for Common Man
(B) Quality Assurance in Official Statistics
(C) Statistics for New India
(D) Statistics for Development
90. Who has been crowned as the India's first Tribal Queen ?
- (A) Panchami Majhi
(B) Rashmirekha Hansdah
(C) Tulasi Munda
(D) Pallavi Durua
91. Under India Smart Cities Award 2018, which Smart City has been selected for 'City Award' for showing great momentum in implementation of projects ?
- (A) Jabalpur
(B) Visakhapatnam
(C) Surat
(D) Pune
92. Who has been sworn in as the new Prime Minister of Italy ?
- (A) Matteo Salvini
(B) Sergio Mattarella
(C) Giuseppe Conte
(D) Luigi Di Maio
93. What is India's rank in the Global Peace Index 2018 ?
- (A) 138th
(B) 129th
(C) 136th
(D) 128th
94. What is the theme of 2018 World Oceans Day (WOD) ?
- (A) Prevent oceans from plastic pollution
(B) Our Oceans, Our Future
(C) Healthy Oceans, Healthy Planet
(D) Preventing plastic pollution and encouraging solutions for a healthy ocean

95. Which Indian Armed Force is observing the year 2018 as 'Year of Disabled Soldiers in Line of Duty' ?
- (A) Indian Army
(B) Indian Air Force
(C) Indian Navy
(D) Indian Coast Guard
96. Who has been honoured with the DRDO Lifetime Achievement Award 2017 ?
- (A) Vasudev Kalkunte Aatre
(B) G. Satheesh Reddy
(C) S. Christopher
(D) V. K. Saraswat
97. The military exercise of Indian Army "Gandiv Vijay 2018" was concluded in which state ?
- (A) Odisha
(B) Rajasthan
(C) Himachal Pradesh
(D) Uttar Pradesh
98. Upper part of sea/aquatic ecosystem contains :
- (A) Plankton
(B) Nekton
(C) Plankton and Nekton
(D) Benthos
99. Green house effect is warming due to :
- (A) Infra-red rays reaching earth
(B) Moisture layer in atmosphere
(C) Increase in temperature due to increase in carbon dioxide concentration of atmosphere
(D) Ozone layer of atmosphere
100. Study of inter-relationships between organisms and their environment is :
- (A) Ecology
(B) Ecosystem
(C) Phytogeography
(D) Ethology

SPACE FOR ROUGH WORK

SPACE FOR ROUGH WORK

SEAL

DO NOT OPEN THIS TEST BOOKLET UNTIL YOU ARE ASKED TO DO SO

Test Booklet Series

A

TEST BOOKLET

T. B. Code : ASG - 2/18

RECRUITMENT OF A. S. O.

(A) TEST OF REASONING & MENTAL ABILITY

Sl. No. **258857**

(B) MATHEMATICS

Time Allowed : $1\frac{1}{2}$ Hours

Maximum Marks : 100

: INSTRUCTIONS TO CANDIDATES :

1. IMMEDIATELY AFTER THE COMMENCEMENT OF THE EXAMINATION, YOU SHOULD CHECK THAT THIS TEST BOOKLET DOES NOT HAVE ANY UNPRINTED OR TORN OR MISSING PAGES OR ITEMS ETC. IF SO, GET IT REPLACED BY A COMPLETE TEST BOOKLET OF THE SAME SERIES ISSUED TO YOU.
2. ENCODE CLEARLY THE TEST BOOKLET SERIES A, B, C OR D, AS THE CASE MAY BE, IN THE APPROPRIATE PLACE IN THE ANSWER SHEET USING BALL POINT PEN (BLUE OR BLACK).
3. You have to enter your Roll No. on the Test Booklet in the Box provided alongside. DO NOT write anything else on the Test Booklet.
4. YOU ARE REQUIRED TO FILL UP & DARKEN ROLL NO., TEST BOOKLET / QUESTION BOOKLET SERIES IN THE ANSWER SHEET AS WELL AS FILL UP TEST BOOKLET / QUESTION BOOKLET SERIES AND SERIAL NO. AND ANSWER SHEET SERIAL NO. IN THE ATTENDANCE SHEET CAREFULLY. WRONGLY FILLED UP ANSWER SHEETS ARE LIABLE FOR REJECTION AT THE RISK OF THE CANDIDATE.
5. This Test Booklet contains 100 items (questions) i.e. Sl. No. 1 to 50 items (questions) for Test of Reasoning & Mental Ability & Sl. No. 51 to 100 items (questions) for Mathematics. Each item (question) comprises four responses (answers). You have to select the correct response (answer) which you want to mark (darken) on the Answer Sheet. In case, you feel that there is more than one correct response (answer), you should mark (darken) the response (answer) which you consider the best. In any case, choose ONLY ONE response (answer) for each item (question).
6. You have to mark (darken) all your responses (answers) ONLY on the separate Answer Sheet provided by using BALL POINT PEN (BLUE OR BLACK). See instructions in the Answer Sheet.
7. (i) All items (questions) carry equal marks. All items (questions) are compulsory. Your total marks will depend only on the number of correct responses (answers) marked by you in the Answer Sheet.
(ii) There will be negative markings for wrong responses (answers). 25 (twenty five) percentage of marks allotted to a particular item (question) will be deducted as negative marking for every response (answer).
(iii) If candidates give more than one response (answer), it will be treated as a wrong response (answer) even if one of the given responses (answers) happens to be correct and there will be same penalty as above to that item (question).
8. Before you proceed to mark (darken) in the Answer Sheet the responses (answers) to various items (questions) in the Test Booklet, you have to fill in some particulars in the Answer Sheet as per the instructions sent to you with your Admission Certificate.
9. After you have completed filling in all your responses (answers) on the Answer Sheet and after conclusion of the examination, you should hand over to the Invigilator the Answer Sheet issued to you. You are allowed to take with you the candidate's copy / second page of the Answer Sheet along with the Test Booklet, after completion of the examination, for your reference.
10. Sheets for rough work are appended in the Test Booklet at the end.

DO NOT OPEN THIS TEST BOOKLET UNTIL YOU ARE ASKED TO DO SO

SEAL

TEST OF REASONING & MENTAL ABILITY

1. Arrange the words given below in a meaningful sequence :
3. How many 4's are there preceded by 7 but not followed by 3 ?

- (i) Presentation
- (ii) Recommendation
- (iii) Arrival
- (iv) Discussion
- (v) Introduction

5 9 3 2 1 7 4 2 6 9 7 4 6 1 3 2 8 7 4 1
3 8 3 2 5 6 7 4 3 9 5 8 2 0 1 8 7 4 6 3

- (A) (v), (iii), (iv), (i), (ii)
- (B) (iii), (v), (iv), (ii), (i)
- (C) (iii), (v), (i), (iv), (ii)
- (D) (v), (iii), (i), (ii), (iv)

- (A) Four
- (B) Three
- (C) Six
- (D) Five

2. How many such pairs of digits are there in the number 421579368 each of which has as many digits between them in the number as when they are arranged in ascending order ?

4. If South-East becomes North, North-East becomes West and so on, what will West become ?

- (A) None
- (B) One
- (C) Two
- (D) Three

- (A) North-East
- (B) North-West
- (C) South-East
- (D) South-West

5. Seismography : Earthquake :: Tachometer : ?

- (A) Landslides
- (B) Strains
- (C) Resistances
- (D) Volcanoes

6. ABCDEFGHIJKLMNOPQR
STUVWXYZ

Which letter in this alphabet is the eighth letter to the right of the letter and which is tenth letter to the left of the last but one letter of the alphabet?

- (A) X
- (B) W
- (C) I
- (D) H

7. If you write down all the numbers from 1 to 100, then how many times do you write 3?

- (A) 11
- (B) 18
- (C) 20
- (D) 21

8. P is the brother of Q and R. S is R's mother. T is P's father. Which of the following statements cannot be definitely true?

- (A) T is Q's father
- (B) S is P's mother
- (C) P is S's son
- (D) Q is T's son

9. Pointing to a lady, a man said, "The son of her only brother is the brother of my wife." How is the lady related to the man?

- (A) Mother's sister
- (B) Grandmother
- (C) Mother-in-law
- (D) Sister of father-in-law

10. There are six persons A, B, C, D, E and F. C is the sister of F. B is the brother of E's husband. D is the father of A and grandfather of F. There are two fathers, three brothers and a mother in the group. Who is the mother?

- (A) A
- (B) B
- (C) C
- (D) E

11. A is B's sister. C is B's mother. D is C's father. E is D's mother. Then, how is A related to D?

- (A) Grandfather
- (B) Grandmother
- (C) Daughter
- (D) Granddaughter

12. A woman introduces a man as the son of the brother of her mother. How is the man, related to the woman ?

- (A) Nephew
- (B) Son
- (C) Cousin
- (D) Uncle to Grandson

Direction (Q. Nos. 13-15) : Find the missing number in the following series of questions :

13. 4, 18, ?, 100, 180, 294, 448

- (A) 48
- (B) 50
- (C) 58
- (D) 60

14. 3, 5, 5, 19, 7, 41, 9, ?

- (A) 71
- (B) 61
- (C) 79
- (D) 69

15. 1, 2, 3, 10, ?, 9802

- (A) 99
- (B) 199

(C) 299

(D) 999

16. Two bus tickets from city A to B and three tickets from city A to C cost

Rs. 77 but three tickets from city A to B and two tickets from city A to C

cost Rs. 73. What are the fares for cities B and C from A ?

- (A) Rs. 4, Rs. 23
- (B) Rs. 13, Rs. 17
- (C) Rs. 15, Rs. 14
- (D) Rs. 17, Rs. 13

17. In a certain code language, '134' means 'good and tasty'; '478' means

'see good pictures' and '729' means 'picture and faint'.

Which of the following digits stands for 'see' ?

- (A) 9
- (B) 2
- (C) 1
- (D) 8

18. 583 is related to 293, in the same way
as 488 is related to

- (A) 291
- (B) 378
- (C) 487
- (D) 581

19. Sam ranked 9th from the top and 38th
from the bottom in a class. How many
students are there in the class ?

- (A) 45
- (B) 47
- (C) 46
- (D) 48

20. If FRIEND is coded as HUMJTK, how
is CANDLE written in that code ?

- (A) EDRIRL
- (B) DCQHJK
- (C) ESJFME
- (D) DEQJQM

21. In a certain code language
COMPUTER is written as
RFUVQNPC. How will MEDICINE be
written in that code language ?

- (A) MFEDJJOE

- (B) EOJDEJFM

- (C) MFEJDJOE

- (D) EOJDJEFM

22. If ROSE is coded as 6821, CHAIR
is coded as 73456 and PREACH is
coded as 961473, what will be the
code for SEARCH ?

- (A) 246173
- (B) 214673
- (C) 214763
- (D) 216473

23. One morning after sunrise, Suresh
was standing facing a pole. The
shadow of the pole fell exactly to his
right. To which direction was he
facing ?

- (A) East
- (B) West
- (C) South
- (D) Data is inadequate

24. Find the odd one out :

- (A) Crusade
- (B) Campaign
- (C) Expedition
- (D) Cruise

25. If in the word 'DISTURBANCE', the first letter is interchanged with the last letter, the second letter is interchanged with the tenth letter and so on, which letter would come after the letter T in the newly formed word ?

- (A) S
- (B) I
- (C) T
- (D) N

26. A tailor had a number of shirt pieces to cut from a roll of fabric. He cut each roll of equal length into 10 pieces. He cut at the rate of 45 cuts a minute. How many rolls would be cut in 24 minutes ?

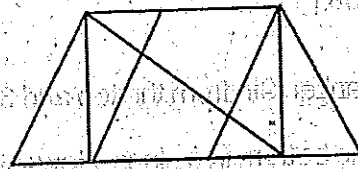
- (A) 32 rolls

- (B) 54 rolls

- (C) 108 rolls

- (D) 120 rolls

27. Find the number of triangles in the given figure :



- (A) 8

- (B) 10

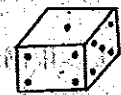
- (C) 12

- (D) 14

28. Observe the dots on a dice (one to six dots) in the following figures. How many dots are contained on the face opposite to that containing four dots ?



(i)



(ii)

- (A) 2

- (B) 3

- (C) 6

- (D) Cannot be determined

29. A picture is copied onto a sheet of paper 8.5 inches by 10 inches. A 1.5 inch margin is left all around. What area in square inches does the picture cover?

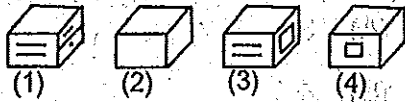
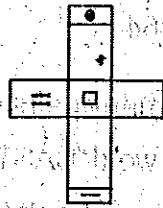
(A) 76

(B) 35

(C) 49

(D) 38.5

30. Choose the box that is similar to the box formed from the given sheet of paper (X):



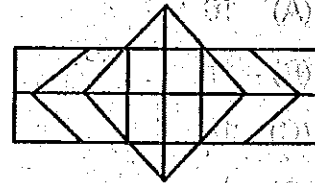
(A) 1, 2 & 3

(B) 1, 3 & 4

(C) 2 & 3

(D) 2, 3 & 4

31. Determine the number of rectangles and hexagons in the following figure:



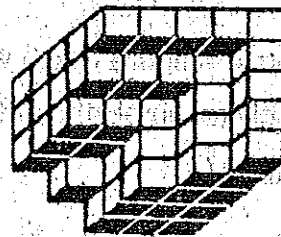
(A) 30, 5

(B) 32, 3

(C) 28, 5

(D) 30, 3

32. Count the number of cubes in the given figure:



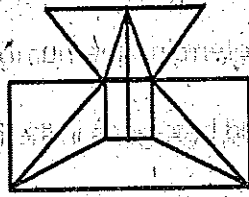
(A) 80

(B) 87

(C) 89

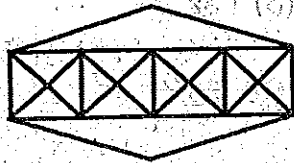
(D) 90

33. Find the minimum number of straight lines required to make the given figure :



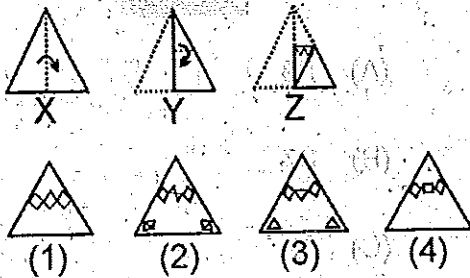
- (A) 16
(B) 17
(C) 18
(D) 19

34. Count the number of triangles and squares in the given figure :



- (A) 36 Triangles, 7 Squares
(B) 38 Triangles, 9 Squares
(C) 40 Triangles, 7 Squares
(D) 42 Triangles, 9 Squares

35. Choose a figure which would most closely resemble the unfolded form of figure (Z) :



- (A) 1

- (B) 2
(C) 3
(D) 4

36. A dice is numbered from 1 to 6 in different ways. If 1 is opposite to 5 and 2 is opposite to 3, then :

- (A) 4 is adjacent to 3 and 6
(B) 2 is adjacent to 4 and 6
(C) 4 is adjacent to 5 and 6
(D) 6 is adjacent to 3 and 4

37. A cube is painted blue on two adjacent surfaces and black on the surfaces opposite to blue surfaces and green on the remaining faces.

Now the cube is cut into 216 smaller cubes of equal size :

- (A) 56
(B) 48
(C) 32
(D) 64

38. How many pairs of letters are there in the word "CASTRAPHONE" which have as many letters between them in the word as in the alphabet ?

- (A) 3
(B) 4
(C) 5
(D) 6

39. How many meaningful English words can be formed with the letters ESRO using each letter only once in each word ?

- (A) None
- (B) One
- (C) Two
- (D) Three

40. 34 is related to 12; in the same way as 59 is related to :

- (A) 45
- (B) 38
- (C) 26
- (D) 14

41. What is the number of triangles that can be formed whose vertices are the vertices of an octagon but have only one side common with that of octagon ?

- (A) 64
- (B) 32
- (C) 24
- (D) 16

Direction (Q. Nos. 42-45) : You are given a combination of alphabets and/or numbers followed by four alternatives (1), (2), (3) and (4). Choose the alternative which closely resembles the mirror image of the given combination.

42. TARAIN1014A

- (1) A1014IART

- (2) A1014IART
- (3) A1014IART
- (4) A1014IART

- (A) 1
- (B) 2
- (C) 3
- (D) 4

43. 1965INDOPAK

- (1) KAPKODNI9651
- (2) KAPKODNI9651
- (3) KAPKODNI9651
- (4) KAPKODNI9651

- (A) 1
- (B) 2
- (C) 3
- (D) 4

44. MALAYALAM

- (1) MALAYALAM
- (2) MALAYALAM
- (3) MALAYALAM
- (4) MALAYALAM

- (A) 1
- (B) 2
- (C) 3
- (D) 4

45. SUPERVISOR
- (1) SUPERVISOR
(2) SUPERVISOR
(3) SUPERVISOR
(4) SUPERVISOR
- (A) 1
(B) 2
(C) 3
(D) 4
46. Find the mirror image when the exact time shown in a clock was 8 : 40 :
- (A) 3 : 20
(B) 3 : 30
(C) 8 : 20
(D) 9 : 20
47. Find the mirror image when the exact time shown in a clock was 6 : 07 :
- (A) 5 : 63
(B) 6 : 53
(C) 5 : 53
(D) 8 : 53
48. In a row of boys, if A who is 10th from the left and B who is 9th from the right interchanges their

positions, A becomes 15th from the left. How many boys are there in the row ?

- (A) 23
(B) 31
(C) 27
(D) 28

49. If Z = 52 and ACT = 48, then BAT will be equal to :

- (A) 39
(B) 41
(C) 44
(D) 46

50. If the first and second letters in the word DEPRESSION were interchanged, also the third and the fourth letters, the fifth and the sixth letters and so on, which of the following would be the seventh letter from the right ?

- (A) R
(B) O
(C) S
(D) P

MATHEMATICS

51. $\frac{1}{1.4} + \frac{1}{4.7} + \frac{1}{7.10} + \frac{1}{10.13} + \frac{1}{13.16} = ?$

(A) $\frac{1}{3}$

(B) $\frac{5}{16}$

(C) $\frac{3}{8}$

(D) $\frac{41}{7280}$

52. What least number of five digits is exactly divisible by 41?

(A) 10045

(B) 10004

(C) 10041

(D) 10025

53. HCF of $\frac{9}{10}$, $\frac{12}{25}$, $\frac{18}{35}$ and $\frac{21}{30}$ is:

(A) $\frac{3}{5}$

(B) $\frac{252}{5}$

(C) $\frac{3}{1400}$

(D) $\frac{63}{700}$

54. 0.04×0.0162 is equal to:

(A) 6.48×10^{-3}

(B) 6.48×10^{-5}

(C) 6.48×10^{-4}

(D) 6.48×10^{-6}

55. $\frac{(489 + 375)^2 - (489 - 375)^2}{489 \times 375} = ?$

(A) 144

(B) 864

(C) 2

(D) 4

56. $0.\overline{63} + 0.\overline{37} + 0.\overline{80} = ?$

(A) $1.\overline{79}$

(B) 1.80

(C) $1.\overline{80}$

(D) $1.\overline{81}$

57. Two numbers are respectively 20% and 50% more than a third number.

These two numbers are in the ratio:

(A) 2 : 5

(B) 4 : 5

(C) 6 : 7

(D) 3 : 5

58. A fruit seller had some apples. He sells 40% and still has 420 apples. Originally he had :
- (A) 588 apples
(B) 600 apples
(C) 672 apples
(D) 700 apples
59. 100 oranges are bought at the rate of Rs. 350 and sold at the rate of Rs. 48 per dozen. The percentage of profit or loss is :
- (A) $14\frac{2}{7}\%$ gain
(B) 15% gain
(C) $14\frac{2}{7}\%$ loss
(D) 15% loss
60. The difference between the simple and compound interest on Rs. 4,000 for 2 years at 10% per annum is :
- (A) Rs. 20
(B) Rs. 30
(C) Rs. 40
(D) Rs. 50
61. A and B can do a work in 8 days, B and C can do the same work in 12 days, A, B and C together can finish the work in 6 days. So A and C together will do it in :
- (A) 8 days
(B) 4 days
(C) 6 days
(D) 12 days
62. A man crosses a 600 m long street in 5 min. His speed in km per hour is :
- (A) 3.6
(B) 7.2
(C) 8.4
(D) 10

63. $(64)^2 \div \sqrt[3]{32768} = ?$

(A) 128

(B) 132

(C) 142

(D) 104

64. If α, β are the roots of a quadratic

equation such that $\alpha + \beta = 24$ and

$\alpha - \beta = 8$, then the equation is :

(A) $x^2 - 24x + 128 = 0$

(B) $x^2 + 24x + 128 = 0$

(C) $x^2 + 24x - 128 = 0$

(D) None of these

65. If $\sqrt{3x} - 2 = 2\sqrt{3} + 4$ then the value

of x is :

(A) $2(1 - \sqrt{3})$

(B) $2(1 + \sqrt{3})$

(C) $1 + \sqrt{3}$

(D) $1 - \sqrt{3}$

66. When $x^3 + 3x^2 - kx + 4$ is divided by

$x - 2$, the remainder is k . The value

of k is :

(A) 2

(B) 4

(C) 8

(D) 6

67. If $(2x + 5y) : (5x - 7y) = 5 : 3$ then $x : y$

is :

(A) 50 : 19

(B) 56 : 63

(C) 48 : 56

(D) 16 : 25

68. The fourth proportional to 5, 4,

25 is :

(A) 5

(B) 10

(C) 15

(D) 20

69. If $\begin{vmatrix} x+3y & y \\ 7-x & 4 \end{vmatrix} = \begin{vmatrix} 4 & -1 \\ 0 & 4 \end{vmatrix}$ then the values of x and y are :

(A) $-7, -1$

(B) $7, -1$

(C) $-7, 1$

(D) $1, 7$

70. If $M = \begin{bmatrix} 2 & 0 \\ 1 & 2 \end{bmatrix}$ and $N = \begin{bmatrix} 2 & 0 \\ -1 & 2 \end{bmatrix}$ then

$M + 2N$ is :

(A) $\begin{bmatrix} 6 & 0 \\ 1 & 6 \end{bmatrix}$

(B) $\begin{bmatrix} 6 & 0 \\ -1 & 6 \end{bmatrix}$

(C) $\begin{bmatrix} 4 & 0 \\ -1 & 4 \end{bmatrix}$

(D) None of these

71. For which value of p , the pair of equations $4x + py + 8 = 0$, $x + y + 1 = 0$ has not unique solution :

(A) 4

(B) 2

(C) 1

(D) 3

72. The discriminant of the quadratic equation $2x^2 - 4x + 3 = 0$ is :

(A) -4

(B) 2

(C) 3

(D) -8

73. If a pair of linear equations is given by $a_1x + b_1y + c_1 = 0$ and $a_2x + b_2y + c_2 = 0$ where $a_1/a_2 \neq b_1/b_2$ then :

(A) The pair of linear equations is consistent

(B) The pair of linear equations is inconsistent

(C) The pair of linear equations is independent

(D) The pair of linear equations is dependent

74. In an A. P. the 5th and 8th terms are 11 and 17 respectively. The 15th term is :

- (A) 31
- (B) 41
- (C) 45
- (D) 47

75. Which of the following are in A. P. ?

- (A) $\frac{1}{\sqrt{3}} + \sqrt{3} + \frac{5}{\sqrt{3}} + \dots$
- (B) $\frac{1}{\sqrt{3}} - (\sqrt{3} + 1) + \frac{5}{\sqrt{3}} + \dots$
- (C) $\frac{1}{\sqrt{2}} + \sqrt{5} + \frac{\sqrt{3}}{2} + \dots$
- (D) $\frac{1}{\sqrt{3} + 1} + \sqrt{3} + \frac{5}{\sqrt{3} + 2} + \dots$

76. The sum of three numbers in A. P. is 36 and their product is 1140, then one of the number is :

- (A) 19
- (B) 10

- (C) 6
- (D) 3

77. Find the sum of first 11 terms of an A. P. of which the 6th term is 45 :

- (A) 445
- (B) 495
- (C) 497
- (D) 485

78. A computer company must have 20 programmers to handle system programming jobs and 30 programmers for application programming. Of those hired, 5 are expected to perform jobs of both types. How many programmers must be hired ?

- (A) 50
- (B) 45
- (C) 35
- (D) 25

79. For an event if 'p' be the probability of the happening of the event and 'q' be the probability of not happening the event then which one of the following is true?

- (A) $p > q$
- (B) $p + q = 1$
- (C) $p < q$
- (D) $p + q = 0$

80. Two dice are thrown. Find the probability that getting a sum of 6:

- (A) $5/36$
- (B) $1/36$
- (C) $1/6$
- (D) $5/18$

81. Three coins are tossed. Find the probability of all heads:

- (A) $1/8$
- (B) $3/8$
- (C) $5/8$
- (D) $7/8$

82. The least number which should be added to 2497 so that the sum is exactly divisible by 5, 6, 4 and 3 is:

- (A) 3
- (B) 13
- (C) 23
- (D) 33

83. If a set has n elements then the power set of that set has _____ elements.

- (A) n^2
- (B) 2^n
- (C) $2n$
- (D) None of these

84. Find the chance of picking an even number from the series of natural numbers 1 to 100:

- (A) $\frac{1}{100}$
- (B) $\frac{1}{50}$
- (C) $\frac{1}{2}$
- (D) None of these

85. An urn contains a thoroughly mixed set of 10 white, 15 red and 25 black marbles. Determine the probability of drawing a white or a red marble :

- (A) $1/5$
- (B) $1/2$
- (C) $3/10$
- (D) None of the above

86. A solid metal cylinder of radius 14 cm and height 21 cm is melted down and recast into spheres of radius 3.5 cm.

So the number of spheres that can be made is :

- (A) 48
- (B) 54
- (C) 63
- (D) 72

87. How many times will the wheel of diameter 105 cm rotate in covering a distance of 330 m ?

- (A) 100 revolutions

- (B) 110 revolutions

- (C) 90 revolutions

- (D) 105 revolutions

88. The area of the segment of a circle, if the angle of the sector is 120° and the radius of the circle is 21 cm is given by :

- (A) 190.953 sq. cm.

- (B) 180 sq. cm.

- (C) 271.047 sq. cm.

- (D) 117.041 sq. cm.

89. A single letter is selected at random from the word PROBABILITY. The probability that it is a vowel is :

- (A) $\frac{3}{11}$

- (B) $\frac{4}{11}$

- (C) $\frac{2}{11}$

- (D) 0

90. A and B are two events such that $P(A) = 0.3$ and $P(A \cup B) = 0.8$. If A and B are independent then P(B) is :

(A) $\frac{2}{3}$

(B) $\frac{3}{8}$

(C) $\frac{2}{7}$

(D) None of these

91. A bag contains 5 brown and 4 white socks. A man pulls out two socks. The probability that they are of the same colour is :

(A) $\frac{5}{108}$

(B) $\frac{1}{6}$

(C) $\frac{5}{18}$

(D) $\frac{4}{9}$

92. Two dice are thrown simultaneously. The probability of getting a total score 5 is :

(A) $\frac{1}{8}$

(B) $\frac{1}{12}$

(C) $\frac{1}{9}$

(D) None of these

93. A bag contains 8 red and 6 blue balls. If 5 balls are drawn at random, what is the probability that 3 are red and 2 are blue ?

(A) $\frac{60}{143}$

(B) $\frac{59}{141}$

(C) $\frac{60}{141}$

(D) $\frac{59}{143}$

94. The G. M. of the numbers $3, 3^2, 3^3, \dots, 3^n$ is :

(A) $3^{2/n}$

(B) $3^{\frac{n-1}{2}}$

(C) $3^{\frac{n}{2}}$

(D) $3^{\frac{n+1}{2}}$

95. In a class of 100 students there are 70 boys whose average marks in a single subject are 75. If the average mark of the complete class is 72, then the average mark of the girls is :

- (A) 73
- (B) 65
- (C) 68
- (D) 74

96. The sum of 7 variates is 12. If six of them are 5, 13, 9, 17, 14 and 10, the 7th variate is :

- (A) 12
- (B) 16
- (C) 17
- (D) 18

97. The median of the following distribution is :

| Weight in nearest kg. | No. of students |
|-----------------------|-----------------|
| 46 | 7 |
| 48 | 5 |
| 50 | 8 |
| 52 | 12 |

| Weight in nearest kg. | No. of students |
|-----------------------|-----------------|
| 53 | 10 |
| 54 | 2 |
| 55 | 1 |

- (A) 50
- (B) 53
- (C) 52
- (D) 54

98. The mode of the following frequency distribution is :

| Marks obtained (out of 10) | No. of students |
|----------------------------|-----------------|
| 0 | 3 |
| 2 | 5 |
| 3 | 12 |
| 4 | 18 |
| 6 | 21 |
| 7 | 8 |
| 9 | 2 |
| 10 | 1 |

- (A) 21
- (B) 8
- (C) 6
- (D) None of these

99. The variance of the first n natural numbers is:

(A) $\frac{n^2 - 1}{12}$

(B) $\frac{n^2 + 1}{6}$

(C) $\frac{n^2 + 1}{6}$

(D) $\frac{n^2 + 1}{12}$

100. The lower quartile range for the data 9, 11, 15, 19, 17, 13, 7 is:

(A) 7

(B) 11

(C) 9

(D) 8

98. The range of the following data is

| | |
|----|----|
| 10 | 10 |
| 12 | 10 |
| 15 | 10 |
| 18 | 10 |
| 20 | 10 |
| 22 | 10 |
| 25 | 10 |
| 28 | 10 |
| 30 | 10 |

- (A) 10
- (B) 8
- (C) 6
- (D) 5

97. The sum of n natural numbers is 121. Six of the numbers are 13, 17, 19 and 20. The value of n is

- (A) 12
- (B) 10
- (C) 11
- (D) 10

96. The median of the following data is

| Weight in kg | Number of students |
|--------------|--------------------|
| 55 | 1 |
| 60 | 2 |
| 65 | 3 |
| 70 | 4 |
| 75 | 5 |

SPACE FOR ROUGH WORK

SPACE FOR ROUGH WORK

SPACE FOR ROUGH WORK

SECRET

SEAL

SECRET

(S)

SECRET

DO NOT OPEN THIS TEST BOOKLET UNTIL YOU ARE ASKED TO DO SO

Test Booklet Series

T. B. Code : ASG - 3/18

A

TEST BOOKLET

RECRUITMENT OF A. S. O.

Sl. No.

561805

(A) ENGLISH LANGUAGE

(B) ODIA LANGUAGE

Time Allowed : 2 Hours

Maximum Marks : 200

: INSTRUCTIONS TO CANDIDATES :

1. IMMEDIATELY AFTER THE COMMENCEMENT OF THE EXAMINATION, YOU SHOULD CHECK THAT THIS TEST BOOKLET DOES NOT HAVE ANY UNPRINTED OR TORN OR MISSING PAGES OR ITEMS ETC. IF SO, GET IT REPLACED BY A COMPLETE TEST BOOKLET OF THE SAME SERIES ISSUED TO YOU.
2. ENCODE CLEARLY THE TEST BOOKLET SERIES A, B, C OR D, AS THE CASE MAY BE, IN THE APPROPRIATE PLACE IN THE ANSWER SHEET USING BALL POINT PEN (BLUE OR BLACK).
3. You have to enter your Roll No. on the Test Booklet in the Box provided alongside. DO NOT write anything else on the Test Booklet.
4. YOU ARE REQUIRED TO FILL UP & DARKEN ROLL NO., TEST BOOKLET / QUESTION BOOKLET SERIES IN THE ANSWER SHEET AS WELL AS FILL UP TEST BOOKLET / QUESTION BOOKLET SERIES AND SERIAL NO. AND ANSWER SHEET SERIAL NO. IN THE ATTENDANCE SHEET CAREFULLY. WRONGLY FILLED UP ANSWER SHEETS ARE LIABLE FOR REJECTION AT THE RISK OF THE CANDIDATE.
5. This Test Booklet contains 200 items (questions) i.e. Sl. No. 1 to 100 items (questions) for English Language & Sl. No. 101 to 200 items (questions) for Odia Language. Each item (question) comprises four responses (answers). You have to select the correct response (answer) which you want to mark (darken) on the Answer Sheet. In case, you feel that there is more than one correct response (answer), you should mark (darken) the response (answer) which you consider the best. In any case, choose ONLY ONE response (answer) for each item (question).
6. You have to mark (darken) all your responses (answers) ONLY on the separate Answer Sheet provided by using BALL POINT PEN (BLUE OR BLACK). See instructions in the Answer Sheet.
7. (i) All items (questions) carry equal marks. All items (questions) are compulsory. Your total marks will depend only on the number of correct responses (answers) marked by you in the Answer Sheet.
(ii) There will be negative markings for wrong responses (answers). 25 (twenty five) percentage of marks allotted to a particular item (question) will be deducted as negative marking for every response (answer).
(iii) If candidates give more than one response (answer), it will be treated as a wrong response (answer) even if one of the given responses (answers) happens to be correct and there will be same penalty as above to that item (question).
8. Before you proceed to mark (darken) in the Answer Sheet the responses (answers) to various items (questions) in the Test Booklet, you have to fill in some particulars in the Answer Sheet as per the instructions sent to you with your Admission Certificate.
9. After you have completed filling in all your responses (answers) on the Answer Sheet and after conclusion of the examination, you should hand over to the Invigilator the Answer Sheet issued to you. You are allowed to take with you the candidate's copy / second page of the Answer Sheet along with the Test Booklet, after completion of the examination, for your reference.
10. Sheets for rough work are appended in the Test Booklet at the end.

SEAL

DO NOT OPEN THIS TEST BOOKLET UNTIL YOU ARE ASKED TO DO SO

ENGLISH LANGUAGE

1. What distinguishes the largest room in the first sentence from its use in the second ?

The largest room in this building can take ten dining tables and some forty-odd chairs. Of course the largest room in the world is the room for improvement.

- (A) The first refers to physical space while the second refers to the metaphorical
(B) Neither room is tangible or real in a specific sense.
(C) Both rooms are large, the second larger than the first.
(D) The first refers to metaphorical space while the second refers to the physical.

(B) John and Jane were two neighbours who had known each other very well. They were living in the same town.

(C) John and Jane were two neighbours who knew each other very well. They lived in the same town.

(D) John and Jane have been two neighbours who knew each other very well. They were living in the same town.

2. Let's go for a walk, _____

(Add the right question tag)

- (A) Shall we ?
(B) Can we ?
(C) May we ?
(D) Will we ?

4. It's raining heavily. I wish _____ an umbrella with me.

(Fill in the blank)

- (A) take away
(B) took
(C) had taken
(D) have taken

3. John and Jane were two neighbours who know each other very well. They live in the same town.

(Put this in the past tense)

(A) John and Jane were two neighbours who have known each other very well. They lived in the same town.

5. "Is it too early to call up someone on the phone ? It's already eight O'clock in the morning," said my brother.

(In indirect speech, what would be the most appropriate reporting verb ?)

- (A) Called
(B) Said
(C) Asked
(D) Wondered

6. To the question, *Why are your clothes wet?* What would be the most appropriate answer from among the following?

(A) My sister has watered the garden.

(B) I have been watering the garden.

(C) I watered the garden until my sister came.

(D) My sister has been watering till now.

7. **A Canteen for Students** can also be written as :

(A) Student's Canteen

(B) A Students Canteen

(C) Students Canteen

(D) Students' Canteen

8. They organized a party _____ his honour. That Ajita was not invited _____ it was a shame. She admired him most and it seems unlikely that she would forgive the organizers' _____ their omission. (Fill in the blanks)

(A) at, for, towards

(B) about, at, against

(C) in, to, for

(D) after, on, with

9. I'm done for the day. I'd now _____ . (Fill in the blank.)

(A) go home

(B) come home

(C) arrive home

(D) back to home

10. While *He hit the dog* is a sentence that makes perfect sense, *The dog he hit* makes incomplete sense, unless we add :

(A) Today

(B) Yelped

(C) When

(D) Helped

11. *During the summer of 2010 I was in Kolkata.* What would this sentence be if you changed the year to 2019?

(A) During the summer of 2019 I will be in Kolkata.

(B) During the summer of 2019 will I be in Kolkata.

(C) During the summer of 2019 I go to Kolkata.

(D) During the summer of 2019 I will go to Kolkata.

12. *Fat, fatter, fattest ; fastidious, more fastidious, most fastidious ; fast,*

- (A) farther, farthest
- (B) more fast, most fast
- (C) faster, fastest
- (D) further, furthest

13. The District Collector did not _____ the office bearers of the Union his approval for holding their meeting during office hours.

(Fill in the blank)

- (A) allow
- (B) grant
- (C) grand
- (D) deliver

14. What is a *headline* ?

- (A) The top line of a page in a printed book.
- (B) The first line of a paragraph in a book.
- (C) The title of a news programme on T.V.
- (D) The title of an item in a newspaper

15. *The benefits of demonitization are moot.* What does this statement mean ?

- (A) We do not understand what its benefits are.
- (B) We do not understand what demonitization is.

(C) We see the benefits of demonitization

(D) The benefits of demonitization are debatable.

16. Local authorities should submit schemes _____ the Minister concerned _____ approval _____ no circumstance will direct application regarding schemes be entertained. (Fill in the blanks)

- (A) to, for, under
- (B) for, in, upon
- (C) about, for, with
- (D) over, without, for

17. Choosing matching prepositions to complete the following phrases :

- (I) According _____ the source (i) of
- (II) Different _____ the first draft (ii) to
- (III) Based _____ this information (iii) by
- (IV) Bored _____ the turn of events (iv) from
- (V) Consisting _____ cards and letters (v) on

According to the code, the correctly matched pairs would be

- (A) I - ii ; II - iv ; III - v ; IV - iii ; V - i
- (B) I - i ; II - ii ; III - iii ; IV - v ; V - iv
- (C) I - v ; II - iii ; III - i ; IV - ii ; V - iv
- (D) I - ii ; II - v ; III - i ; IV - iii ; V - iv

18. By this time in 2019, Susan _____ finished her first degree in Medicine.

- (A) will be
- (B) will have
- (C) might have
- (D) may be

19. *We are in awe of this leader. We cannot approach him easily.* Use the adjectival form of "approach" and rewrite the second sentence.

- (A) He is hard to be approachable.
- (B) He is not easily approachable.
- (C) For him to approach is not easy.
- (D) He is hardly approachable.

20. *The politician made false claims and called his honest colleagues corrupt, but when the facts became public, he had to eat his words.* What does the last phrase here mean?

- (A) To say sorry for his mistake
- (B) To confess the truth
- (C) To take back what he said
- (D) To swear a false oath

21. None of us _____ to change the schedule unless some of you _____ it inconvenient for some reason. (Fill in the blanks)

- (A) wants, find

- (B) want, finds
- (C) wanted, find
- (D) want, found

22. Identify the one word here that you cannot use before LITTLE to indicate that there is only a very small amount of something:

- (A) So
- (B) Too
- (C) Precious
- (D) Hardly

23. If I do not leave now, _____

(Complete the sentence in the most sensible way)

- (A) my last bus will not go
- (B) I shall miss my last bus
- (C) my last bus will miss me
- (D) I cannot miss my last bus

24. Only _____ cynic would argue with _____ statement that most people learn their native language with _____ fair degree of success.

(Supply articles where necessary)

- (A) the, the, a
- (B) a, the, the
- (C) the, a, a
- (D) a, the, a

25. The clerical staff in banks and finance departments are supposed to have considerable skill with numbers. In one word, their ability is _____.

- (A) numerous
- (B) numerological
- (C) numerational
- (D) numerical

26. What is the meaning of *hoard* ?

- (A) To store secretly
- (B) To consume secretly,
- (C) To fasten by hooking
- (D) To pull upwards

27. There are reports of arson and looting in the city. We'd better be careful. The news is quite _____.

- (A) distrusting
- (B) disturbing
- (C) disturbed
- (D) distasteful

28. Identify the correct sentence from the following :

- (A) They considered him a fool.
- (B) They regarded him a fool.
- (C) They considered him as a fool.
- (D) They regarded him as fool.

29. When I reached the cathedral, the wedding ceremony _____ already begun. (Fill in the blank)

- (A) has
- (B) was
- (C) had
- (D) is

30. In reported speech, how will this read ?

"I do not want to be forced into believing that God exists," said the girl. "If God indeed exists as you assert, show me, at least once, where I shall see Him like I see you now!"

(A) The girl told me that she wanted not to be forced into believing God existed, and if indeed He did not, as I asserted, she asked to be shown God, at least once, where she saw Him like she was seeing me now.

(B) The girl explained that she be forced not into believing that God exists, and if indeed He does, as I asserted, she demands to be shown at least once, where she would see Him like she saw me then.

(C) The girl told me that she did not want to be forced into believing, and that if indeed God exists, as I assert, she demanded to be shown Him, at least once, where she would see Him like she sees me now.

(D) The girl explained that she did not want to be forced into believing that God existed, and if indeed He did, as I asserted, she demanded to be shown Him, at least once, where she might see Him like she saw me then.

31. May you live happily and long !
 In very formal English, what does this express ?
- (A) Desire
 - (B) Approval
 - (C) Happiness
 - (D) Wish

32. Which of the following is more polite as a request ?
- (A) Will you lend me your scooter ?
 - (B) Would you lend me your scooter, please ?
 - (C) Can you lend me your scooter, please ?
 - (D) Shall I take your scooter on loan ?

33. What does the following sentence really mean ?
He has been sleeping for five hours.
- (A) He is sleeping on for hours.
 - (B) He has lost sense of time.
 - (C) And he is still sleeping.
 - (D) And he will not wake up now.

34. _____ do you wish to see ?
 _____ wishes to see you ?
 (Fill in the blanks)
- (A) Whom, Who
 - (B) Who, Who

- (C) Whose, Who
- (D) Who, Whom

35. Only graduates are eligible _____ this post. You must apply _____ the Registrar for filing your application. The Registrar's office is adjacent _____ the Commissioner's,
 (Fill in the blanks)

- (A) to, for, with
- (B) in, to, along
- (C) for, with, to
- (D) for, to, to

36. In the sentence, *The girls sang songs while the boys played hockey,* while means :
- (A) At some other time
 - (B) At the same time
 - (C) At different venues
 - (D) At the same venue

37. Determine the part of speech of fast in the following sentences

- I kept the fast for a month, I cannot fast anymore. I ran fast. Still I could not catch the fast train to Bandra.
- (A) Verb, adverb, adjective, noun
 - (B) Noun, verb, adjective, adverb
 - (C) Verb, adjective, noun, adverb
 - (D) Noun, verb, adverb, adjective

38. (Active) Someone has picked my pocket. In passive voice, this will read :

- (A) My pocket was picked.
- (B) Who has picked my pocket ?
- (C) Someone's pocket has been picked.
- (D) My pocket has been picked.

39. I have not met my brother lately. A phrase closest to "lately" would be _____.

- (A) in the recent years
- (B) late in the year
- (C) later than last month
- (D) in the recent past

40. Spot the incorrect sentence below :

- (A) Don't talk so loud.
- (B) I can bowl fast.
- (C) She is naughtier.
- (D) You can only guess.

41. What does **ought to** in the following sentence suggest ?

We ought to love our neighbours.

- (A) Compulsion and obligation
- (B) Moral obligation or desirability
- (C) Conscientious regard for the right
- (D) Religious commitment to good life

42. Combine the following simple sentences into one complex sentence :

He will be late. That is certain.

- (A) That will be late for him certainly.
- (B) Certainly he will be late.
- (C) It will be certain that is late for him.
- (D) It is certain that he will be late.

43. We derive nouns from some verbs.

For example, from *grieve* we derive *grief*, from *speak* we derive *speech*, etc. Likewise, from *weave* we derive _____.

- (A) weaving
- (B) woven
- (C) web
- (D) warp

44. How long _____ for the bus ?

(Fill in the blank)

- (A) have you been waiting
- (B) you wait and look
- (C) you are waiting
- (D) you have been waiting

45. I have been working in this office for two weeks. I _____ no trouble so far.

- (A) have had
- (B) have
- (C) had
- (D) am having

46. I have had some trouble getting good stationery. I did shop at two places but I was disappointed. _____ was well-stocked.

- (A) Either
- (B) Both
- (C) Neither
- (D) Each

47. Rewrite the following sentence beginning with "What!":

She is a very clever officer.

- (A) What very clever officer she is.
- (B) What a very clever officer she is.
- (C) What cleverness she has as officer!
- (D) What a very clever officer she is!

48. Spot the one correct sentence among the following:

- (A) Have I to come to office every day?
- (B) It is hard to make you to understand simple things.
- (C) I have known him for a long time.
- (D) I must reply letters promptly.

49. Rather than finding a _____ to a problem, some people delight in finding a problem to a _____.

(Fill in the blanks)

- (A) solution;
- (B) solving
- (C) issue;
- (D) way out.

50. Spot the odd word in the following group:

- (A) Modernity
- (B) Moderate
- (C) Modernism
- (D) Modern

51. What do we understand from the following sentence?

The areas of town near the river are liable to flooding.

- (A) These areas are often flooded.
- (B) These areas are lying low.
- (C) These areas need protection.
- (D) The rivers flood in these areas.

52. In which of the following does *just* appear in the correct order?

- (A) I just have returned from a wedding in Balasore.
- (B) I have returned just from a wedding in Balasore.
- (C) I have returned from just a wedding in Balasore.
- (D) I have just returned from a wedding in Balasore.

53. *Their son went off and got married last week just like that.*

What does *just like that* mean in this context?

- (A) Just like his parents.
- (B) Just like we expected
- (C) Suddenly and unexpectedly
- (D) Predictably and wisely

54. What idiomatic expression conveys the sense of the general truth of a statement by disagreeing with it?

- (A) The exception proves the rule.
- (B) The rule proves the exception.
- (C) Where there is a will, there is a way.
- (D) Where there is a way, there is a will.

55. *Life is not measured by the number of breaths we take, but by the moments that take our breath _____.*

- (A) away
- (B) on
- (C) off
- (D) after

56. What does this sentence really mean?

A book we have not read is no more non-existent than a country we have not visited.

- (A) Both the book we have read and the country we have visited do not exist on earth.

(B) We have read the book but the country exists even if we did not visit it.

(C) We have neither read the book nor visited the country.

(D) Both the book we haven't read and the country we have not visited nevertheless exist.

57. *I don't know Mr. Patel's age but he seems quite old.* What does *quite* mean here?

- (A) Silently
- (B) Looking
- (C) Fairly
- (D) Not very

58. English is different _____ German in that the latter is a highly inflected language.

- (A) from
- (B) to
- (C) than
- (D) since

59. When you cannot see the picture clearly, you say:

- (A) I'm unable to see the picture clearly.
- (B) I cannot hardly see the picture clearly.
- (C) I cannot able to see the picture clearly.
- (D) I can hardly see the picture clearly.

60. *Inflation is like sin, every government denounces it and every government practises it.*

Which of the following readings of this statement is more or less correct?

- (A) Inflation is a sin, but a government hardly knows this.
- (B) Inflation is not a sin, but when a government practises it, it becomes sinful.
- (C) Inflation is sinful but every government finds it inescapable.
- (D) Inflation is least sinful when every government practises it.

61. Which of the following is the correct word-formation?

- (A) Detest + ible = detestible
- (B) Ditest + able = difestable
- (C) Ditest + eable = ditesteable
- (D) Detest + able = detestable

62. A swarm of insects, a flight of birds, a herd of cattle, a flock of sheep, a _____ of wolves.

- (A) litter
- (B) covey
- (C) host
- (D) pack

63. *The report implies that there is severe scarcity of water and food.* Pick out the word that suggests that the news is not quite explicit or direct.

- (A) Implies
- (B) Severe
- (C) Scarcity
- (D) Report

64. *The boys are tired.*

What would be the next logical and correct sentence?

- (A) They are playing for almost two hours.
- (B) They will have played for almost two hours.
- (C) They have been playing for almost two hours.
- (D) They will be playing for almost two hours.

65. *Democratic nations naturally stand more in need of forms than other nations, and they naturally respect them less.*

What do *they* and *them* refer to?

- (A) Forms, democratic nations
- (B) Forms, democracies
- (C) Democratic nations, forms
- (D) Democratic nations, other nations

66. *I am very tired. I'd rather _____.*
 (A) work more
 (B) not to work more
 (C) work anymore
 (D) not work anymore

67. *I think I'll wait _____ Saturday before I decide what to do.*
 (A) till
 (B) before
 (C) unto
 (D) until

68. *There was _____ concern about frequent power failure in the city.*
 (A) lots of
 (B) a lot of
 (C) a great deal of
 (D) very much

69. _____ the enquiry, the official maintained that nothing illegal had been done.
 (A) In
 (B) Upon
 (C) At
 (D) Since

70. *I shall look through your report when I have a spare _____.*
 (A) time
 (B) moment

- (C) minute
 (D) occasion

71. *What _____ does it make if you don't buy a car?*
 (A) difference
 (B) change
 (C) matter
 (D) advantage

72. Spot the word below that has no plural form in English.
 (A) Bird
 (B) Sky
 (C) Place
 (D) Happiness

73. Put this in direct speech:
He asked me whether I would attend that day's meeting.
 (A) "Will I attend that day's meeting?" He said to me.
 (B) "Will you attend today's meeting?" He said to me.
 (C) "Whether you are attending meeting," He said to me.
 (D) "When will you attend the meeting?" He said to me.

74. Which of the following is an incorrect sentence ?

(A) Hari is not used to the English weather.

(B) Hari is used to speaking Bangla all the time.

(C) Hari is getting used as living in Odisha.

(D) Hari is not used to cooking his own food.

75. Danny, you're late ! You are going to miss your train, you _____.

(A) better hurry up.

(B) will get along quickly

(C) had better hurry

(D) will be delayed

76. *Are we going to the mall if we are wed better be prepared they dont*

take cash we need to pay by card or paytm in any case we are not making any big purchases are we.

(Punctuate this utterance correctly)

(A) "Are we going to the mall ?" "If we are we'd better be prepared they don't take cash." We to

need to pay by card or Paytm in any case we are not making any big purchases. Are we ?"

(B) "Are we going to the mall if we are wed better be prepared

they don't take cash." We to need to pay by card or Paytm

in any case we are not making any big purchases." Are we ?"

(C) "Are we going to the mall ? If we are, we'd better be prepared. They don't take

cash. We need to pay by card, or Paytm. In any case, we are

not making any big purchases, are we ?"

(D) "Are we going to the mall ? If we are we'd better be prepared. They don't take

cash. We need to pay by card or Paytm. In any case we are

not making any big purchases, are we ?"

77. Which numerical code arranges the bits of this sentence coherently ?

(i) To do anything (C)

(ii) The Government

(iii) I do not expect

(iv) In this matter

(A) (iii), (iv), (ii), (i)

(B) (iii), (ii), (i), (iv)

(C) (i), (iii), (ii), (iv)

(D) (iv), (i), (ii), (iii)

78. Fill in the gaps appropriately with **after, with, in, among, for** :

_____ the 1960's Mohammed Rafi was a superstar _____ popular singers in South Asia. He was born _____ 1924

_____ Kotla Sultan Singh Village _____ Punjab.

_____ almost twenty years, Rafi was the most sought _____

singer _____ the Hindi film industry, _____ his illustrious

career, he received six Filmfare Awards and was honoured

_____ the National Film Award once.

(A) In, among, in, in, in, For, after, in, in, with

(B) Among, in, in, in, in, after, in, in, with, for

(C) For, in, in, in, with, for, after, with among

(D) In, with, for, in, after, in, among, with, for

79. To which question would this be an appropriate answer ?

"No, I won't be available on Mondays and Thursdays ?"

(A) Are you coming to office on Mondays and Thursdays ?

(B) Will you be available on Mondays and Thursdays ?

(C) Can you be available on Mondays and Thursdays ?

(D) How available you are on Mondays and Thursdays ?

80. Rewrite this sentence beginning with the phrase, **The young man...**

The mob lynched the young man who accompanied the young child to school.

(A) The young man who accompanied the young child to school the mob was lynched.

(B) The young man who accompanied the young child was lynched by the school.

(C) The young man who accompanied the young child to school was lynched by the mob.

(D) The young man lynched by the mob when accompanied young child to school.

81. It takes _____ cars than ten boats to ferry them to the destination.

(Fill in the blank)

(A) few

(B) fewer

(C) a few

(D) fewest

82. Alit and Anil have failed the Examinations. Neither _____ a good student at school.

- (A) was
- (B) were
- (C) been
- (D) nor

83. Rewrite this sentence using *let*.

Most schools do not allow their students to leave before 4 P. M.

- (A) Most schools do not let their students leave before 4 P. M.
- (B) Most schools let students stay longer than 4 P. M.
- (C) Most students do not let their schools leave before 4 P. M.
- (D) Most schools do not let stay longer than 4 P. M.

84. Complete the sentence using the right form of the verb within brackets :

Mahesh wishes he (live) with his parents in his own flat.

- (A) Mahesh wishes that his parents lived with him in his own flat.
- (B) Mahesh wishes that his own flat for his parents' life.

(C) Mahesh wishes he lived his own parents in his flat.

(D) Mahesh wishes that he lived with his parents in his own flat.

85. Identify the sentence that carries the **incorrect phrase** :

- (A) Harish's two sons take after him.
- (B) Harish cannot take on more work.
- (C) Harish has taken off in a good job.
- (D) Harish is taken ill and won't come.

86. *I beg your pardon. When someone says so, what is meant is that _____.*

- (A) the speaker hasn't quite heard what you said
- (B) the speaker hasn't quite understood what you said
- (C) the speaker is apologizing for some wrong he has done
- (D) the speaker has neither heard nor quite understood you

87. "I have very little time," said my boss.

"Please come to the point." My boss wants me _____.

(A) to be brief and start talking about the matter right away

(B) to beat about the bush rather than be direct

(C) to wait a little and come to him later

(D) to be less formal and up front in discussing the matter

88. Satya has been behaving in

such a way that someday he will get into trouble. He is, in other words, _____.

(A) asking trouble to come

(B) asking for trouble

(C) ask after trouble

(D) asking about the trouble

89. The sign VALET PARKING

in front of a building suggests that _____.

(A) you could expect an attendant to show you a parking lot

(B) you could expect an attendant to park your vehicle for you

(C) you could seek a valet's help in negotiating a car deal

(D) you could seek a valet's help at the parking lot

90. No, I have never been to Sambalpur.

(What appropriate question would give you this answer?)

(A) Have you ever been to Sambalpur?

(B) Had you gone ever to Sambalpur?

(C) Are you ever going to Sambalpur?

(D) Have you gone ever to Sambalpur?

91. I haven't seen you in a long time.

Where _____?

(A) are you

(B) were you

(C) have you gone

(D) have you been

92. We were not alone in the room. He

sat _____ me; _____ us, there

were two others there.

(A) beside, besides

(B) besides, beside

(C) next, between

(D) by, besides

93. I am not aware of anyone applying for leave today. If I get to know, I will inform you at once. (Write this in the simple past tense.)

(A) I was not aware of anyone applying for leave yesterday. If

I got to know, I would inform you at once.

(B) I did not know of anyone applying for leave yesterday. If I would get to know, I informed you at once.

(C) I was not aware of anyone that applied for leave yesterday. If I knew, I informed you at once yesterday.

(D) I did not know of anyone's applied for leave at once. If I got knowledge, I had informed you yesterday.

94. One rolls up one's sleeve _____.
(Fill in the blank)

(A) to sleep

(B) to eat

(C) to beg

(D) to fight

95. What is the correct meaning of **irrefutable** in the following sentence?
The car was parked on the right side of the road. The bus hit the man on

the road who was walking on the left side. The driver of the car had nothing to do with this accident. That is irrefutable.

(A) That which cannot be reversed

(B) That which is impossible to disprove

(C) That which is impossible to disapprove

(D) That which is cannot be faulted

96. Which of the following is *not* a meaning of the word **bar**?

(A) A barrier or restriction to action or advance.

(B) A counter in a pub where alcoholic drinks are served.

(C) A fleshy filament growing from the mouth of a fish.

(D) A metal strip below the clasp of a medal.

Direction (Q. Nos. 97-100) : Read the following passage and answer the given questions based on this passage :

Koshish (meaning "making an effort") started as a student initiative, a project on homelessness and destitution. It was trying hard to decriminalize begging. It is shameful that we have a law that

punishes the poor for being poor, with detention up to 10 years. It is the best evidence of apathy that we, as a society, have towards the poor. Huge numbers of people with mental illness or disability, victims of violence or displacement, denotified tribes, abandoned elders, daily-wage workers, lepers and others are punished every day. Recently, Delhi struck down the anti-begging law. After Delhi, it is now the legal responsibility of all states to repeal their anti-beggary law. People should not be punished for the state's failure. That is injustice.

97. What evidence do we have for the country's apathy towards the poor ?

- (A) Huge numbers of people are still poor.
- (B) Our laws punish rather than help the poor.
- (C) We have no project for rehabilitation.
- (D) We still have anti-begging law.

98. How are the ill and the poor punished every day ?

- (A) By criminalizing begging and detaining them in shelters.
- (B) By decriminalized begging and enforced anti-begging.

(C) By detaining the poor upto 10 years.

(D) By uneven state laws punishing us.

99. What has Delhi done recently ?

(A) It has decided that the anti-begging law will no longer be enforced.

(B) It has pleaded for the repeal of law relating to begging in public.

(C) It was pleaded for the restitution of law relating to begging in public.

(D) It has decried the repeal of anti-begging law in all the states of India.

100. What is the state's failure according to the author ?

(A) The neglect of laws to punish those who ill-treat the poor.

(B) The neglect of the destitute and the homeless in the country.

(C) The slowness in repealing anti-beggary law.

(D) The uneven standards of social justice in the country.

ODIA LANGUAGE

ନିର୍ଦ୍ଦେଶ (ପ୍ରଶ୍ନ ସଂଖ୍ୟା 101-110) : ଠିକ୍ ଶବ୍ଦ
(ଉତ୍ତର) ଚିହ୍ନଟ କର ।

101. (A) ପୁରୋହିତ୍ୟ

(B) ପୌରହିତ୍ୟ

(C) ପୌରୋହିତ୍ୟ

(D) ପୌରହିତ

102. (A) ବିଷର୍ଣ୍ଣ

(B) ବିଶର୍ଣ୍ଣ

(C) ବିସର୍ଣ୍ଣ

(D) ବିଷଣ୍ଣ

103. (A) ଉତ୍ତରାୟନ

(B) ଉତରାୟନ

(C) ଉତରାୟଣ

(D) ଉତ୍ତରାୟଣ

104. (A) ନିର୍ଦ୍ଦିନୀ

(B) ନିର୍ଦ୍ଦିନୀ

(C) ନିର୍ଦ୍ଦିନ

(D) ନିର୍ଦ୍ଦିନ

105. (A) ଅକ୍ଷୁଣ୍ଣ

(B) ଅକ୍ଷୁଣ୍ଣ

(C) ଅକ୍ଷୁଣ୍ଣ

(D) ଅକ୍ଷୁଣ୍ଣ

106. (A) ଅରଖିତ

(B) ଅରଖାତ

(C) ଅରକ୍ଷିତ

(D) ଅରକ୍ଷାତ

107. (A) ଅନୁସୂୟା

(B) ଅନୁସୂୟା

(C) ଅନସୂୟା

(D) ଅନସୂୟା

108. (A) ଅଧୁନସ୍ତ

(B) ଅଧାନସ୍ତ

(C) ଅଧୁନ

(D) ଅଧାନ

109. (A) ଅନିବାୟ୍ୟ

(B) ଅନୀବାୟ୍ୟ

(C) ଅନିବାୟ୍ୟ

(D) ଅନୀବାୟ୍ୟ

110. (A) ପର୍ଯ୍ୟବେଶିତ

(B) ପର୍ଯ୍ୟବଶିତ

(C) ପର୍ଯ୍ୟବସିତ

(D) ପର୍ଯ୍ୟବେସିତ

ନିର୍ଦ୍ଦେଶ (ପ୍ରଶ୍ନ ସଂଖ୍ୟା 111-120) : ଠିକ୍ ପ୍ରତିଶବ୍ଦ

115. 'ଗଣପତି' ର ପ୍ରତିଶବ୍ଦ :

ବାଛ ।

111. 'ଅମର' ର ପ୍ରତିଶବ୍ଦ :

- (A) ଅନଳ
- (B) ଅମିୟ
- (C) ଅଭରାକ୍ଷ
- (D) ଅହିମକର

112. 'ଦରୁକ' ର ପ୍ରତିଶବ୍ଦ :

- (A) ଦାନବ
- (B) ମାନବ
- (C) ଦେବତା
- (D) କିଳର

113. 'ତନୟା' ର ପ୍ରତିଶବ୍ଦ :

- (A) ସୁତା
- (B) ସୁତୀ
- (C) ଜଣିତା
- (D) ତନୁକ

114. 'ଜାହ୍ନବା' ର ପ୍ରତିଶବ୍ଦ :

- (A) ବିଷ୍ଣୁପଦ
- (B) ବିଷ୍ଣୁପଦୀ
- (C) ବିଷ୍ଣୁପଦା
- (D) ବିଷ୍ଣୁ

(A) ରାଜା

(B) ବିନାୟକ

(C) ପରମାତ୍ମା

(D) ଭଗୀରଥ

116. 'ଅରଣ୍ୟ' ର ପ୍ରତିଶବ୍ଦ :

(A) ପାବକ

(B) ବିପିନ

(C) ବାସବ

(D) କୋରକ

117. 'କାଉ' ର ପ୍ରତିଶବ୍ଦ :

(A) ପରଭୃତ

(B) ପୁରନ୍ଦର

(C) ନଗ

(D) ଖଗ

118. 'ପବନ' ର ପ୍ରତିଶବ୍ଦ :

(A) ପୁଷ୍କରାକ

(B) ପାରାବୀର

(C) ପବମାନ

(D) ଭରଣ

119. 'ସାଧ' ର ପ୍ରତିଶବ୍ଦ :

- (A) ମହା
- (B) ପବି
- (C) ଅହି
- (D) ବଜା

120. 'ମେଘ' ର ପ୍ରତିଶବ୍ଦ :

- (A) ମରୁତ
- (B) ମିଳିତ
- (C) ଜାମୁତ
- (D) ସରିତ

ନିର୍ଦ୍ଦେଶ (ପ୍ରଶ୍ନ ସଂଖ୍ୟା 121-130) : ବିପରୀତ ଶବ୍ଦ ଚୟନ କର ।

121. 'ହର୍ଷ' ର ବିପରୀତ :

- (A) ଦୁଃଖ
- (B) ବିହର୍ଷ
- (C) ଶୋକ
- (D) ବିଷାଦ

122. 'ଆତ୍ମ' ର ବିପରୀତ :

- (A) ଉଷ
- (B) ଶୁଖିଲା
- (C) ସିନ୍ଧ
- (D) ଶୁଷ

123. 'ଅର୍ପଣ' ର ବିପରୀତ :

- (A) ନିଃର୍ପଣ
- (B) ଗ୍ରହଣ
- (C) ଉର୍ପଣ
- (D) ଅନାର୍ପଣ

124. 'ଆକର୍ଷଣ' ର ବିପରୀତ :

- (A) ଅନାକର୍ଷଣ
- (B) ନିଃକର୍ଷଣ
- (C) ବିକର୍ଷଣ
- (D) ନିଷର୍ଷଣ

125. 'ଆବୃତ୍ତ' ର ବିପରୀତ :

- (A) ନିବୃତ୍ତ
- (B) ଅନାବୃତ୍ତ
- (C) ଅନାବୃତ୍ତ
- (D) କେଉଁଟି ନୁହଁ

126. 'ଖ୍ୟାତି' ର ବିପରୀତ :

- (A) ଖ୍ୟାତି
- (B) ଅନଖ୍ୟାତି
- (C) ଅଖ୍ୟାତି
- (D) ଅପଖ୍ୟାତି

127. 'ତେଜା' ର ବିପରୀତ :

- (A) ଛୋଟ
- (B) ବାଜରା
- (C) ଗୋଡ଼ା
- (D) ବାସ୍ତୁ

128. 'ଜୀବନ' ର ବିପରୀତ :

- (A) ମରଣ
- (B) ମୃତ୍ୟୁ
- (C) ଆଜୀବନ
- (D) କେଉଁଟି ନୁହଁ

129. 'ଝଅଟ' ର ବିପରୀତ :

- (A) ବିନୟ
- (B) ଡେରି
- (C) ମଠ
- (D) ଧାର

130. 'ଗାଳୁଆ' ର ବିପରୀତ :

- (A) ସତ୍ୟ
- (B) ସତ୍ୟବାଦୀ
- (C) ସତ୍ତ୍ୱିଆ
- (D) ସତସତ୍ତ୍ୱିକା

131. କର୍ତ୍ତା ପଦର ବଚନ ଅନୁସାରେ କ୍ରିୟା ପଦ ପରିବର୍ତ୍ତନ ହୁଏ :

- (A) ଠିକ୍
- (B) ଭୁଲ୍
- (C) ବିଭକ୍ତିର ପରିବର୍ତ୍ତନ ଘଟେ
- (D) ବିଶେଷ୍ୟର ପରିବର୍ତ୍ତନ ଘଟେ

132. _____ ଅନୁସାରେ କ୍ରିୟା ପଦର ପରିବର୍ତ୍ତନ ଘଟେ ।

- (A) ବିଶେଷ୍ୟର ଲିଙ୍ଗ
- (B) ବିଶେଷଣର ଲିଙ୍ଗ
- (C) ସର୍ବନାମର ଲିଙ୍ଗ
- (D) କେଉଁଟି ନୁହଁ

133. କର୍ତ୍ତା ପଦକୁ _____ କୁହାଯାଏ ।

- (A) ବିଶେଷ୍ୟ
- (B) ଉଦ୍ଦେଶ୍ୟ
- (C) ସର୍ବନାମ
- (D) କେଉଁଟି ନୁହଁ

134. ବାକ୍ୟର କର୍ତ୍ତା ପଦ ଓ କ୍ରିୟା ପଦ ମଧ୍ୟରେ କୌଣସି ଅନୁକ୍ରମ ନ ଥାଏ :

- (A) ଠିକ୍
- (B) ଭୁଲ୍
- (C) କୃତ୍ରିମ ସଂପର୍କ ଘଟେ
- (D) କେଉଁଟି ନୁହଁ

135. _____ ବାକ୍ୟର କର୍ତ୍ତା ପଦ ହୋଇପାରେ ।

- (A) ସର୍ବନାମ
- (B) ବିଶେଷ୍ୟ
- (C) ବିଶେଷଣ
- (D) କେଉଁଟି ନୁହଁ

136. କର୍ତ୍ତା ପଦ ଓ କ୍ରିୟା ପଦ ପୁରୁଷ ନିର୍ଭରଣାଳ :

- (A) ଚିନ୍ତା
- (B) ହୁଏ
- (C) ବିଶେଷ୍ୟ ନିର୍ଭରଣାଳ
- (D) ସର୍ବନାମ ନିର୍ଭରଣାଳ

137. କର୍ତ୍ତାପଦ ସଂପର୍କରେ ଯାହା କୁହାଯାଇଥାଏ ତାହା

- (A) ବିଧେୟ
- (B) ଭବେଷ୍ୟ
- (C) କ୍ରିୟା ବିଶେଷଣ
- (D) ଅବ୍ୟୟ

138. _____, ସରଳ ବାକ୍ୟର ଏକ ମୁଖ୍ୟ

- (A) ଗୋଟିଏ କର୍ତ୍ତା ପଦ
- (B) ଗୋଟିଏ କ୍ରିୟା ପଦ
- (C) ଗୋଟିଏ ସମାପିକା କ୍ରିୟା ପଦ
- (D) ଗୋଟିଏ ଅସମାପିକା କ୍ରିୟା ପଦ

139. ଓଡ଼ିଆ ଭାଷାରେ କର୍ତ୍ତାର ଲିଙ୍ଗ ଅନୁସାରେ କ୍ରିୟା

- (A) ଘଟେ
- (B) ଘଟେ ନାହିଁ
- (C) ଘଟିପାରେ
- (D) କେଉଁଟି ନୁହଁ

140. ପିଲାଟି ଘରକୁ ଯାଉଛି । ଏହି ବାକ୍ୟରେ 'ଯା' ଧାତୁର

- (A) କର୍ତ୍ତା ପଦର ଲିଙ୍ଗ
- (B) କର୍ତ୍ତା ପଦର ବଚନ
- (C) କର୍ତ୍ତା ପଦର ପୁରୁଷ
- (D) କର୍ତ୍ତା ପଦର ପୁରୁଷ ଓ ବଚନ

141. କାଳ ସାହାଯ୍ୟରେ କର୍ମର _____

- (A) ମନୋଭାବ
- (B) କ୍ରିୟା
- (C) ସ୍ଥାନ
- (D) ସମୟ

142. ଅସଂପନ୍ନ ଓ ସଂପନ୍ନ ଭାବ ପ୍ରକାଶ ପାଇଁ ଓଡ଼ିଆ

- (A) ଗୋଟିଏ କ୍ରିୟା ପଦରେ ପ୍ରତ୍ୟୟ ରହିଛି ।
- (B) ଦୁଇଟି
- (C) ତିନୋଟି
- (D) ଚାରୋଟି

143. କ୍ରିୟା ପଦ ମଧ୍ୟରେ ଆଭିମୁଖ୍ୟ ବାଚକ ପ୍ରତ୍ୟୟ

- (A) ଯୁକ୍ତ ଥାଏ
- (B) ଯୁକ୍ତ ନ ଥାଏ
- (C) ଉତ୍ତ୍ୟ ରହେ
- (D) କେଉଁଟି ନୁହଁ

144. ସାଧାରଣ ବର୍ତ୍ତମାନ କାଳ ପ୍ରଥମ ପୁରୁଷ ଏକ ବଚନର କ୍ରିୟା ପଦ _____ ।
- (A) ଖେଳେ (A)
- (B) ଖେଳୁଛି (B)
- (C) ଖେଳିଛି (C)
- (D) କେଉଁଟି ନୁହଁ (D)

145. ସାଧାରଣ ଭବିଷ୍ୟତ କାଳ ତୃତୀୟ ପୁରୁଷ ବହୁବଚନର କ୍ରିୟା ପଦ _____ ।
- (A) ଖେଳିବୁ (A)
- (B) ଖେଳିବି (B)
- (C) ଖେଳିବ (C)
- (D) ଖେଳିବେ (D)

146. ସଂପଦ ଅତୀତ କାଳ ଦ୍ୱିତୀୟ ପୁରୁଷ ବହୁବଚନର କ୍ରିୟାପଦ _____ ।
- (A) ପଢୁଥିଲ (A)
- (B) ପଢିଥିଲ (B)
- (C) ପଢିଲ (C)
- (D) ପଢିଲୁ (D)

147. 'ଶୁଣିଲି' କ୍ରିୟା ପଦର ପୁରୁଷ ଓ ବଚନ ନିର୍ଣ୍ଣୟ କର ।
- (A) ପ୍ରଥମ ପୁରୁଷ ଏକବଚନ (A)
- (B) ତୃତୀୟ ପୁରୁଷ ଏକବଚନ (B)
- (C) ପ୍ରଥମ ପୁରୁଷ ବହୁବଚନ (C)
- (D) ତୃତୀୟ ପୁରୁଷ ବହୁବଚନ (D)

148. ଯେଉଁ ପଦ କ୍ରିୟାର _____ ପ୍ରକାଶ କରେ, ତାହାକୁ କ୍ରିୟା ବିଶେଷଣ କୁହାଯାଏ ।
- (A) ଗୁଣ (A)
- (B) ଅବସ୍ଥା (B)
- (C) ଗୁଣ ବା ଅବସ୍ଥା (C)
- (D) ପୁରୁଷ ଓ ବଚନ (D)

149. 'ପଢୁଥିଲି' କ୍ରିୟା ପଦର _____ ର ଧାରଣା ମିଳୁଛି ।
- (A) କାଳ (A)
- (B) ପୁରୁଷ (B)
- (C) ବଚନ (C)
- (D) କାଳ, ପୁରୁଷ ଓ ବଚନ (D)

150. 'ପିଢୁଥିଲା' କ୍ରିୟା ପଦରେ 'ପିଢୁ' _____ ରୂପରେ ଅଛି ।
- (A) ଅସମାପିକା (A)
- (B) ସମାପିକା (B)
- (C) ଦ୍ୱିତ୍ୱ (C)
- (D) ପୂର୍ଣ୍ଣଯୋଗିକ (D)

151. ଅବ୍ୟୟ ଯୋଗେ _____ ଗଠିତ ହୁଏ ।
- (A) ବିଶେଷଣ (A)
- (B) କ୍ରିୟା ବିଶେଷଣ (B)
- (C) ଗୁଣବାଚକ ବିଶେଷଣ (C)
- (D) ଭାବବାଚକ ବିଶେଷଣ (D)

152. 'ଶେକୁଧର' କେଉଁ କାଳ ସୂଚକ ?

- (A) ଅତୀତ
- (B) ବର୍ତ୍ତମାନ
- (C) ସମ୍ଭାବ୍ୟ
- (D) କେଉଁଟି ନୁହଁ

153. 'ଉ' ପ୍ରତ୍ୟୟର ଦ୍ଵିତ୍ଵ ପ୍ରୟୋଗରେ _____

କ୍ରିୟା ପଦ ଗଠିତ ହୁଏ ।

- (A) ସମାପିକା
- (B) ଅସମାପିକା
- (C) ମୌଳିକ
- (D) ପୂର୍ଣ୍ଣ

154. 'ଦେଖୁଥିଲା' କ୍ରିୟା ପଦରେ 'ଥା' _____

ସୂଚକ ପ୍ରତ୍ୟୟ ।

- (A) ପୁରୁଷ
- (B) ବଚନ
- (C) କେଉଁଟି ନୁହଁ
- (D) ପୁରୁଷ ଓ ବଚନ

155. ଯୌଗିକ କ୍ରିୟା ପଦର ପ୍ରଥମ କ୍ରିୟାଟି ସର୍ବଦା _____

ରୂପ ବିଶିଷ୍ଟ ।

- (A) ଅସମାପିକା
- (B) ସମାପିକା
- (C) ସକର୍ମକ
- (D) କେଉଁଟି ନୁହଁ

156. ଏଥୁମଧ୍ୟରୁ କ୍ରିୟା ବିଶେଷଣ ପଦ ଚିହ୍ନଟ
କର ।

- (A) ଝୁଲି ଝୁଲି ଚାଲେ
- (B) କାନ୍ଦୁ କାନ୍ଦୁ ଗଲା
- (C) ସତ ସତିକା ଘଟଣା
- (D) ଚିକି-ମିକିଆ ବାସନ

157. 'ଶି' ପ୍ରତ୍ୟୟ କ୍ରିୟାପଦ _____ ସୂଚ
ହୁଏ ।

- (A) ଆରମ୍ଭରେ
- (B) ଶେଷରେ
- (C) ମଝିରେ
- (D) କେଉଁଟି ନୁହଁ

158. 'କାଳ' ର ସୂଚନା _____ ପଦରୁ
ମିଳିଥାଏ ।

- (A) ଉଦ୍ଦେଶ୍ୟ
- (B) ବିଧେୟ
- (C) କର୍ତ୍ତାପଦ
- (D) କ୍ରିୟାପଦ

159. କ୍ରିୟା ପଦରେ 'ନ' ଏକ ନାସ୍ତିବାଚକ _____ ।

- (A) କ୍ରିୟା
- (B) ଅବ୍ୟୟ
- (C) ପ୍ରତ୍ୟୟ
- (D) ବିଶେଷ୍ୟ

160. ଓଡ଼ିଆରେ ପ୍ରେରଣାର୍ଥକ କ୍ରିୟା ପଦ _____

ପ୍ରତ୍ୟୟ ଯୁକ୍ତ ହୋଇଥାଏ ।

- (A) 'ଆ' ଓ 'ଏ'
- (B) 'ଆ' ଓ 'ଇ'
- (C) 'ଇ' ଓ 'ଉ'
- (D) 'ଏ' ଓ 'ଇ'

161. ସବିକରଣ କ୍ରିୟା ପଦରେ _____ ବିକରଣ

ଥାଏ ।

- (A) ଗୋଟିଏ
- (B) ଦୁଇଟି
- (C) ତିନୋଟି
- (D) ପାଞ୍ଚୋଟି

162. 'ଯାଉଥିବ' କ୍ରିୟା ପଦରେ 'ଆ' ଏକ _____

କ୍ରିୟା ।

- (A) କ୍ରିୟା ବିଭକ୍ତି
- (B) କ୍ରିୟାବାଚକ ବିଶେଷଣ
- (C) ସହାୟକ କ୍ରିୟା
- (D) ଅସମାପିକା କ୍ରିୟା

163. _____ ଏକ ଅକର୍ମକ କ୍ରିୟା ।

- (A) ପଢ଼ିବା
- (B) ଦଳିବା
- (C) ମାରିବା
- (D) କାଶିବା

164. ସେ ଭାଷ କଟମଡ଼ କଲେ, ଏ ବାକ୍ୟରେ _____

କ୍ରିୟା ବ୍ୟବହୃତ ।

- (A) ଅମିଶ କ୍ରିୟା
- (B) ଧ୍ୱନ୍ୟାତ୍ମକ କ୍ରିୟା
- (C) ପ୍ରଯୋଜକ କ୍ରିୟା
- (D) କେଉଁଟି ନୁହେଁ

165. _____ ଏକ ସଂପର୍କତା ସୂଚକ ଅସମାପିକା

କ୍ରିୟା ।

- (A) ବସୁବସୁ
- (B) ବସି ବସି
- (C) ବସିଲା
- (D) ବସିଥିଲା

166. ଅସମାପିକା କ୍ରିୟାର ଦ୍ୱିରୁଚି ଦ୍ୱାରା _____

ନିଷ୍ପନ୍ନ ହୁଏ ।

- (A) ସଂପର୍କସୂଚକ କ୍ରିୟାପଦ
- (B) ଧ୍ୱନ୍ୟାତ୍ମକ ଶବ୍ଦ
- (C) ସ୍ୱରା ଶବ୍ଦ
- (D) କ୍ରିୟା ବିଶେଷଣ

167. 'ମରାମରି' ଏକ _____ କ୍ରିୟା ପଦ ।

- (A) ଯୌଗିକ
- (B) ଏକକ
- (C) ଅସମାପିକା
- (D) ସକର୍ମକ

168. _____ ଏକ ଅପୂର୍ଣ୍ଣ ରୂପ ଧାତୁ ।

- (A) ଯା
- (B) ଶୋ
- (C) ପଢ଼
- (D) କର

169. ସେ କହନ୍ତେ ପିଲାଟି ଦୌଡ଼ିଲା । ବାକ୍ୟରେ

_____ ଏକ ଅସମାପିକା କ୍ରିୟା ।

- (A) ଗଲା
- (B) ଅନ୍ତେ
- (C) ଦୌଡ଼ିଲା
- (D) କହନ୍ତେ

170. ସେ ଆମ ଘରେ ଖାଇଲେ । ଏ ବାକ୍ୟରେ

‘ଖାଇଲେ’ ଏକ _____ କ୍ରିୟା ।

- (A) ନାମଧାତୁ
- (B) ଅମିଶ୍ର
- (C) ମିଶ୍ର
- (D) ପ୍ରଯୋଜକ

171. ‘ଖାଇଦେଲା’ କ୍ରିୟା ପଦରେ ‘ଦେଲା’ ଏକ

_____ କ୍ରିୟା ।

- (A) ସହାୟକ କ୍ରିୟା
- (B) ସାହାଯ୍ୟକାରୀ କ୍ରିୟା
- (C) ମିଶ୍ର କ୍ରିୟା
- (D) ଅମିଶ୍ର କ୍ରିୟା

172. ଆବିମୁଖ୍ୟଯୁକ୍ତ କ୍ରିୟାପଦ ସର୍ବଦା _____

ହୋଇଥାଏ ।

- (A) ସରଳ କ୍ରିୟା
- (B) ସହାୟକ କ୍ରିୟା
- (C) ଯୌଗିକ କ୍ରିୟା
- (D) କେଉଁଟି ନୁହଁ

173. ‘ସେ ଖାଇବଣି’ । ଏ ବାକ୍ୟରେ ‘ଣି’ ପ୍ରତ୍ୟୟ

_____ ଅର୍ଥରେ ବ୍ୟବହୃତ ।

- (A) ସମାପ୍ତି
- (B) ସମାବ୍ୟ
- (C) ଅନୁଜ୍ଞା
- (D) ସମାବ୍ୟ ସମାପ୍ତି

174. କ୍ରିୟା ପଦ ସହିତ ଯେଉଁ ପ୍ରତ୍ୟୟ ଯୁକ୍ତ ହୁଏ, ତାହାକୁ

_____ କୁହାଯାଏ ।

- (A) କ୍ରିୟା ବିଶେଷଣ
- (B) କ୍ରିୟା ବିଭକ୍ତି
- (C) କୃତକ ପଦ
- (D) ତତ୍ତ୍ୱିତ ପଦ

175. ସେ କ୍ରିକେଟ୍ ଟେଣିସ୍ ଫେରୁଛି । ରେଖାଙ୍କିତ ପଦଟି

_____ ।

- (A) ସଂପନ୍ନ ସୂଚକ ଅସମାପିକା କ୍ରିୟା
- (B) ସଂପନ୍ନ ସୂଚକ ସମାପିକା କ୍ରିୟା
- (C) ଅସଂପନ୍ନ ସୂଚକ ଅସମାପିକା କ୍ରିୟା
- (D) ଅସଂପନ୍ନ ସୂଚକ ସମାପିକା କ୍ରିୟା

176. 'ଶି' ପ୍ରତ୍ୟୟ _____ କାଳରେ ବ୍ୟବହୃତ ହୁଏ

- ନାହିଁ ।
- (A) ସମାବ୍ୟ
- (B) ବର୍ତ୍ତମାନ
- (C) ଅନୁଜ୍ଞା
- (D) ଭବିଷ୍ୟତ

177. 'ନ' ପୂର୍ବପ୍ରତ୍ୟୟ ଚାରେ _____ କ୍ରିୟା

- ସହିତ ସଂଯୁକ୍ତ ହୋଇପାରେ ।
- (A) ସମାପିକା
- (B) ଅକର୍ମକ
- (C) ସକର୍ମକ
- (D) ଅସମାପିକା

178. ଯେଉଁ କ୍ରିୟାରେ କର୍ମ ନ ଥାଏ, ତାହାକୁ _____ କ୍ରିୟା କୁହାଯାଏ ।

- (A) ନିଷର୍ମକ
- (B) ସକର୍ମକ
- (C) ଅକର୍ମକ
- (D) କର୍ମହୀନ

179. 'ଶାନ୍ତନୟନ' କ୍ରିୟାପଦରେ 'ନ' ଧ୍ବଜ _____

- (A) ଅତ୍ୟଧିକ ପ୍ରତ୍ୟୟ
- (B) ନାତ୍ୟଧିକ ପ୍ରତ୍ୟୟ
- (C) ଅତ୍ୟଧିକ କ୍ରିୟା
- (D) ନାତ୍ୟଧିକ କ୍ରିୟା

180. ନାମ ଧାତୁ କ୍ରିୟା _____ ରୁ ବିଶେଷଣ ଗଠିତ

- ହୋଇଥାଏ ।
- (A) ବିଶେଷ୍ୟ ଓ ବିଶେଷଣ
- (B) ଅବ୍ୟୟ ଓ ବଚନ
- (C) ଲିଙ୍ଗ ଓ ବଚନ
- (D) ବିଶେଷ୍ୟ ଓ ଅବ୍ୟୟ

181. 'ଆ' ଦୁଇଟି କାଳ ନିମନ୍ତେ ପ୍ରୟୋଗ କରାଯାଇ _____

- ପାରେ :
- (A) ଅତୀତ ଓ ବର୍ତ୍ତମାନ
- (B) ଅତୀତ ଓ ଭବିଷ୍ୟତ
- (C) ବର୍ତ୍ତମାନ ଓ ଭବିଷ୍ୟତ
- (D) କେଉଁଟି ନୁହଁ

182. ଗଙ୍ଗା ନଦୀର ପାଣି ପବିତ୍ର ଅଟେ । ଏହି ବାକ୍ୟରୁ

- କ୍ରିୟା ପଦ ନିର୍ଣ୍ଣୟ କର :
- (A) ନଦୀ
- (B) ପାଣି
- (C) ପବିତ୍ର
- (D) ଅଟେ

183. ପବନ ବହେ । ଏହି ବାକ୍ୟର କ୍ରିୟା ପଦର କାଳ

- ନିର୍ଣ୍ଣୟ କର :
- (A) ସାଧାରଣ ଅତୀତ
- (B) ସାଧାରଣ ବର୍ତ୍ତମାନ
- (C) ସାଧାରଣ ଭବିଷ୍ୟତ
- (D) ସଂପନ୍ନ ବର୍ତ୍ତମାନ

184. 'ଅଟକ' କ୍ରିୟା ପଦ _____ ରୁ ଗଠିତ ।

- (A) 'ଅଟକ' ବିଶେଷ୍ୟ
- (B) 'ଅଟକ' ବିଶେଷଣ
- (C) ଅଟକାଭବା କ୍ରିୟା ପଦ
- (D) କେଉଁଟି ନୁହଁ

185. ଗୋଟିଏ ଧାତୁ ଓ ଗୋଟିଏ ବିଭକ୍ତିକୁ ନେଇ ଗଠିତ ହୁଏ _____ କ୍ରିୟା ପଦ ।

- (A) ଯୌଗିକ
- (B) ବିଭକ୍ତି
- (C) ଏକକ
- (D) ସମାପିକା

186. 'ଇଲ' ପ୍ରତ୍ୟୟ _____ କାଳ ସୂଚକ ।

- (A) ବର୍ତ୍ତମାନ
- (B) ଅତୀତ
- (C) ଭବିଷ୍ୟତ
- (D) ସମ୍ଭାବ୍ୟ

187. 'ସାଇକ୍ଲିଷ୍ଟ' କ୍ରିୟା ପଦଟି _____ ରୂପ ବିଶିଷ୍ଟ ।

- (A) ସଂପର୍କ ଅତୀତ
- (B) ସଂପର୍କ ଭବିଷ୍ୟତ
- (C) ସଂପର୍କ ବର୍ତ୍ତମାନ
- (D) ସାଧାରଣ ବର୍ତ୍ତମାନ

188. 'ଶା' ଧାତୁରୁ 'ଶୁଆ' _____ ଧାତୁ ଗଠିତ ।

- (A) ନାମ
- (B) ଏକକ

(C) ଯୌଗିକ

(D) ପ୍ରେରଣାର୍ଥକ

189. 'ଚନ୍ଦ୍ର'ର ପ୍ରତିଶବ୍ଦ ଚିହ୍ନଟ କର :

- (A) ନଭସ୍ଥାନ
- (B) ନିଶାନ୍ତ
- (C) ମୃଗାଳ
- (D) କୁରଙ୍ଗ

190. 'ଦୟାଳୁ'ର ବିପରୀତ ଶବ୍ଦ ବାଛି :

- (A) ନିଷ୍ଠୁର
- (B) କଠୋର
- (C) ନିର୍ଦ୍ଦୟ
- (D) ନିର୍ମମ

191. ଶୁଦ୍ଧ ରୂପଟି ଚିହ୍ନଟ କର :

- (A) ଉନବିଂଶ
- (B) ଉନବିଂଶ
- (C) ଉନବିଂଶ
- (D) ଉନବିଂଶ

192. କ୍ରିୟାପଦରେ 'ନ' ମଧ୍ୟ ପ୍ରତ୍ୟୟଭାବେ _____ କାଳରେ ବ୍ୟବହୃତ ହୁଏ ନାହିଁ ।

- (A) ବର୍ତ୍ତମାନ
- (B) ଭବିଷ୍ୟତ
- (C) ଅତୀତ
- (D) ଭବିଷ୍ୟତ ଓ ଅତୀତ

193. ଯେଉଁ କ୍ରିୟା ଦ୍ୱାରା କିଛି କରାଯାଇବା ଅର୍ଥାଂ ପ୍ରକାଶିତ ହୁଏ, ତାହା _____ କ୍ରିୟା ।

- (A) ମିଶ୍ର କ୍ରିୟା
- (B) ଅମିଶ୍ର କ୍ରିୟା
- (C) ପ୍ରେରଣାର୍ଥକ କ୍ରିୟା
- (D) ନାମ ଧାତୁ କ୍ରିୟା

194. 'ଉ' ଯୋଗ କରି ଦ୍ୱିତ୍ୱ କରିବା ଦ୍ୱାରା _____ ର ସୃଷ୍ଟି ହୋଇଥାଏ ।

- (A) ସମାପିକା କ୍ରିୟା
- (B) ଅସମାପିକା କ୍ରିୟା
- (C) କ୍ରିୟା ବିଶେଷଣ
- (D) କେଉଁଟି ନୁହଁ

195. ସମାପିକା କ୍ରିୟା ସହିତ _____ ପର ପ୍ରତ୍ୟୟ ସଂଯୁକ୍ତ ହୁଏ ।

- (A) ନାହିଁ
- (B) ନୁହେଁ
- (C) ନ
- (D) କେଉଁଟି ନୁହଁ

196. _____ ଏକ ସାହାଯ୍ୟକାରୀ କ୍ରିୟା ।

- (A) ଖାଇଲା
- (B) ଖାଇଅଛି
- (C) ଖାଇଥିବ
- (D) ଖାଇ ସାରିଲା

କ୍ରିୟା ।

- (A) ଯାଉଯାଉ
- (B) ଧରିଧରି
- (C) ସଜସଜ ହେବା
- (D) ଗଢ଼ାଗଢ଼ି ହେଲେ

198. ଠିକ୍ ଶବ୍ଦଟି ଚିହ୍ନଟ କର :

- (A) ପୁରସ୍କାର
- (B) ପୁରସ୍କାର
- (C) ପୁରସ୍କାର
- (D) କେଉଁଟି ନୁହଁ

199. 'ନିଅଣ୍ଟ' ର ବିପରୀତ ଅର୍ଥରୋଧକ ଶବ୍ଦଟି ଚିହ୍ନଟ କର :

- (A) ଅଧିକ
- (B) ବହୁତ
- (C) ବଳକା
- (D) ବେଶୀ

200. 'ପୋଖରୀ' ର ପ୍ରତିଶବ୍ଦ ବାଛି :

- (A) ନୀରବ
- (B) ସରସୀ
- (C) ଅମୃତ
- (D) ପାବକ



(FOR ROUGH WORK ONLY)

(FOR ROUGH WORK ONLY)

SEAL